
COMBINED SCIENCE

5129/11

Paper 1 Multiple Choice

May/June 2019

1 hour

Additional Materials: Multiple Choice Answer Sheet
 Soft clean eraser
 Soft pencil (type B or HB is recommended)

READ THESE INSTRUCTIONS FIRST

Write in soft pencil.

Do not use staples, paper clips, glue or correction fluid.

Write your name, centre number and candidate number on the Answer Sheet in the spaces provided unless this has been done for you.

DO NOT WRITE IN ANY BARCODES.

There are **forty** questions on this paper. Answer **all** questions. For each question there are four possible answers **A, B, C** and **D**.

Choose the **one** you consider correct and record your choice in **soft pencil** on the separate Answer Sheet.

Read the instructions on the Answer Sheet very carefully.

Each correct answer will score one mark. A mark will not be deducted for a wrong answer.

Any rough working should be done in this booklet.

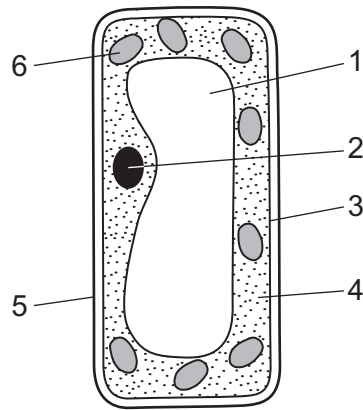
A copy of the Periodic Table is printed on page 16.

Electronic calculators may be used.

This document consists of **15** printed pages and **1** blank page.



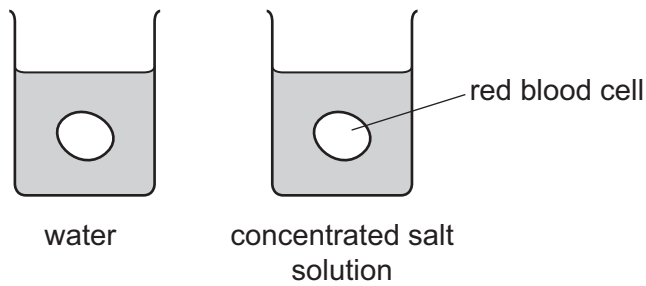
1 The diagram shows a plant cell.



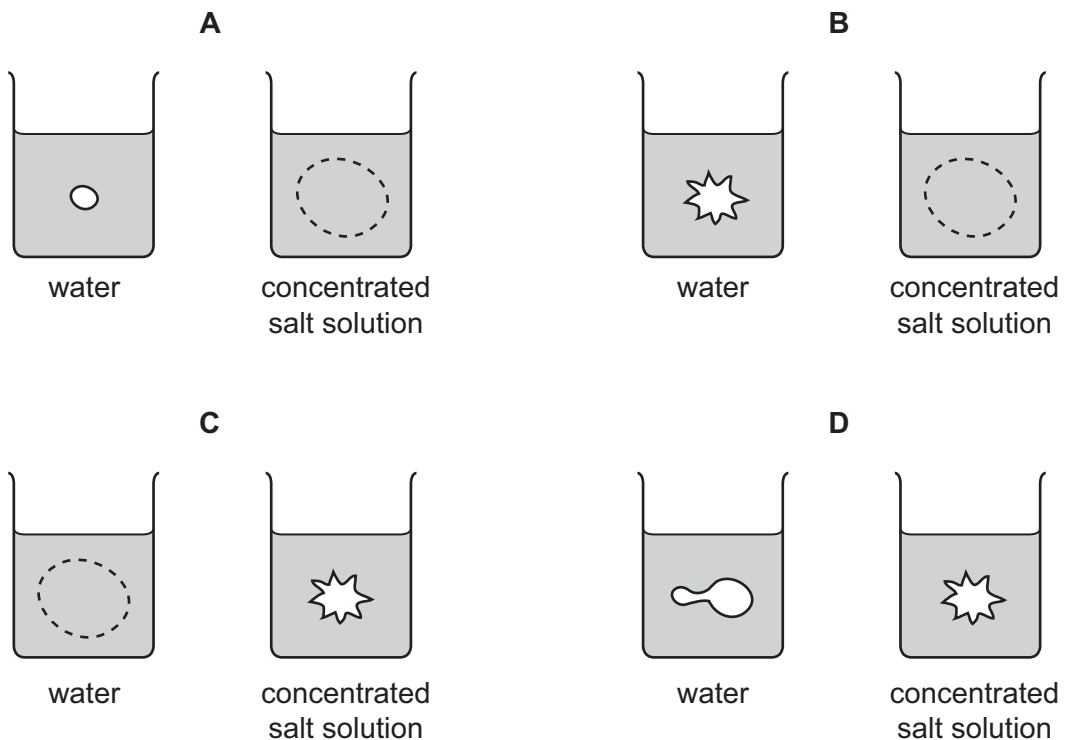
Which cell structures are also present in animal cells?

- A** 1, 2 and 3 **B** 2, 3 and 4 **C** 3, 4 and 5 **D** 4, 5 and 6

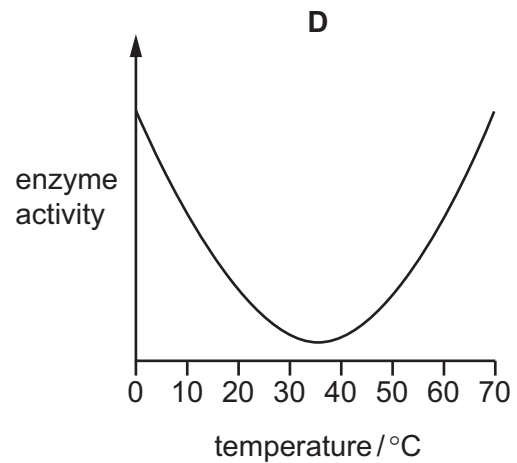
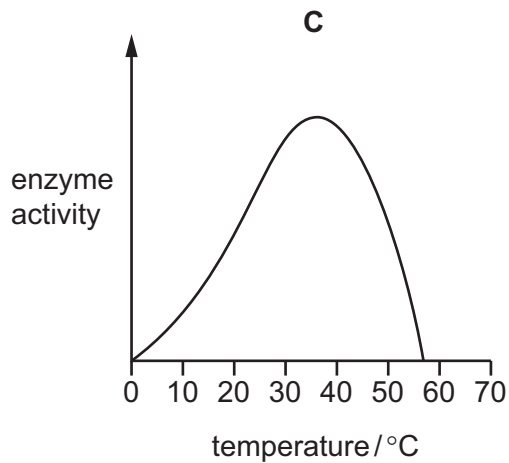
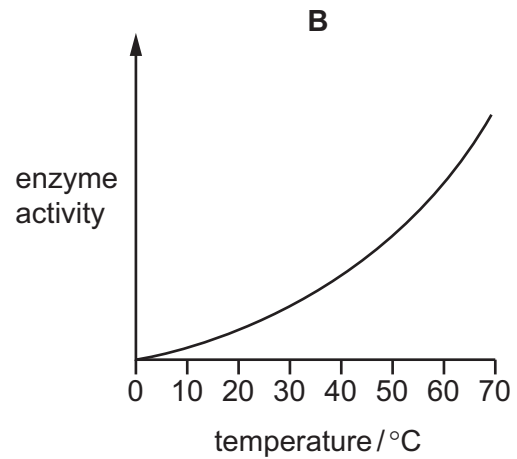
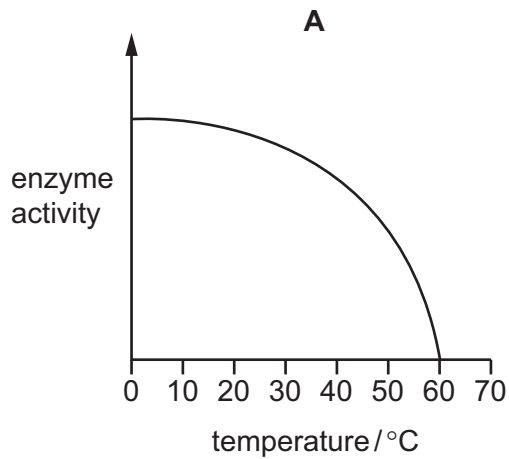
2 One beaker contains water. Another beaker contains a concentrated salt solution. A red blood cell is placed into each beaker.



Which diagram shows the appearance of the cells after 15 minutes?



- 3 Which graph shows how the activity of an enzyme in the human alimentary canal varies with temperature?



- 4 Which gas, produced in photosynthesis, is released through the stomata?

- A** carbon dioxide
- B** oxygen
- C** sulfur dioxide
- D** water vapour

- 5 Which row shows the causes of constipation and obesity?

	constipation	obesity
A	lack of carbohydrates	excess of carbohydrates
B	lack of carbohydrates	excess of protein
C	lack of fibre	excess of carbohydrates
D	lack of fibre	excess of vitamins

6 Which statement describes transpiration?

- A the flow of a sugary solution inside a stem
- B the loss of water vapour through stomata
- C the movement of mineral ions down a stem
- D the release of energy in plant cells

7 Which row describes a vein?

	walls	valves
A	thick	no
B	thick	yes
C	thin	no
D	thin	yes

8 Which statement explains why, even when athletes have finished a race, they carry on breathing more quickly and deeply than normal?

- A to remove carbon dioxide produced during anaerobic respiration
- B to remove urea produced by the breakdown of amino acids
- C to replace stored glycogen in muscles
- D to take in extra oxygen to break-down lactic acid

9 The breakdown of glucose in respiration produces carbon dioxide as a waste product.

How is carbon dioxide removed from the body?

- A breathed out by the lungs
- B egested from the anus
- C excreted in the urine
- D lost through the skin in sweat

10 What happens to hormones after they have had their effect on target organs?

- A absorbed by the blood
- B destroyed by the liver
- C digested by the stomach
- D excreted by the kidneys

11 Which statement describes a drug?

- A an externally administered substance that modifies chemical reactions
- B an externally administered substance that modifies physical reactions
- C an internally administered substance that modifies chemical reactions
- D an internally administered substance that modifies physical reactions

12 Air pollution can affect gaseous exchange surfaces in the lungs.

Which statements (in general) about individuals exposed to polluted air are correct?

- 1 They will tire easily.
- 2 They will be susceptible to respiratory infections.
- 3 Their lungs will get bigger.
- 4 They will be able to run for a longer period of time.

- A 1 and 2 B 1 and 4 C 2 and 3 D 3 and 4

13 Which row shows an example of each type of birth control?

	chemical	hormonal	surgical
A	condom	spermicide	vasectomy
B	pill	vasectomy	condom
C	spermicide	pill	vasectomy
D	vasectomy	condom	pill

14 Which statement about gases is correct?

- A Particles are close together in a random arrangement.
- B Particles are close together in a regular arrangement.
- C Particles are far apart in a random arrangement.
- D Particles vibrate about fixed positions in a regular arrangement.

15 What is the definition of nucleon number?

- A the number of neutrons in an atom
- B the total number of neutrons and electrons in an atom
- C the total number of protons and electrons in an atom
- D the total number of protons and neutrons in an atom

16 The table gives the electronic structure of four elements.

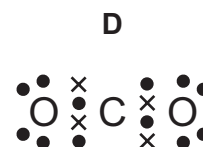
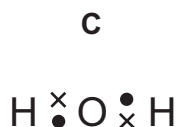
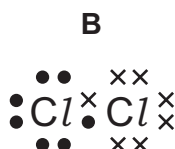
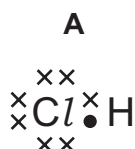
The letters in the table are not the usual symbols of the elements.

element	electronic structure
W	2,7
X	2,8,5
Y	2,8,6
Z	2,8,8,2

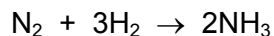
Which two elements form an ionic compound?

- A** W and X **B** W and Y **C** W and Z **D** X and Y

17 Which dot and cross diagram of a molecule is **not** correct?



18 The equation for the formation of ammonia, NH_3 , in the Haber process is shown.



What is the mass of ammonia made from 14 g of nitrogen?

- A** 17 g **B** 28 g **C** 34 g **D** 68 g

19 The table shows the pH value of 5 soil samples.

soil sample	pH value
P	8.0
Q	7.5
R	7.0
S	6.5
T	6.0

Cabbages grow best in alkaline soil.

In which soil samples should cabbage grow best?

- A** P and Q **B** Q and T **C** R and P **D** S and T

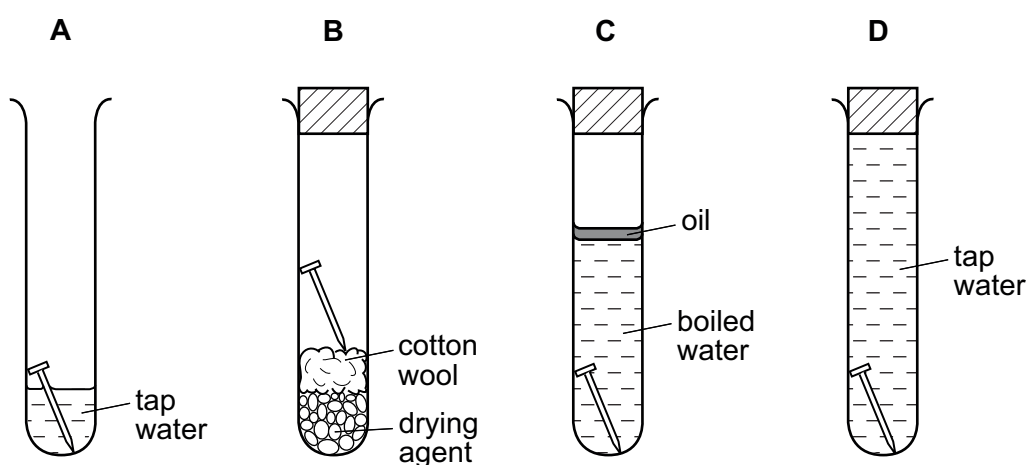
23 Which statements about zinc are correct?

- 1 It is alloyed with copper to form brass.
- 2 It is used to make food containers.
- 3 It is alloyed with iron to make steel.
- 4 It is used to coat iron for rust prevention.

A 1 and 2 **B** 1 and 4 **C** 2 and 3 **D** 3 and 4

24 A student set up an experiment using iron nails as shown. The tubes are left for one week.

In which tube does most rusting take place?



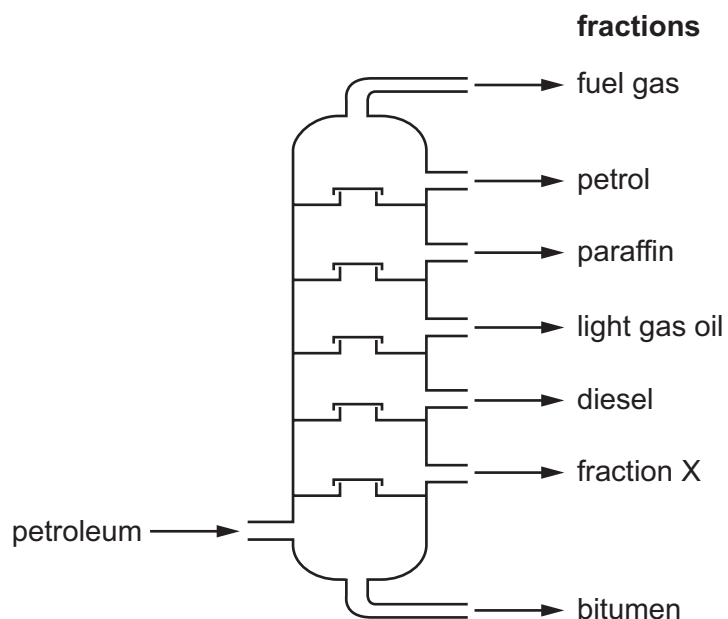
25 A student suggests the following four statements about the members of a homologous series.

- 1 They have similar chemical properties.
- 2 They have the same melting points.
- 3 Their molecules all contain at least two carbon atoms.
- 4 They can be represented by the same general formula.

Which statements are correct?

A 1 and 3 **B** 1 and 4 **C** 2 and 3 **D** 3 and 4

26 The fractional distillation of petroleum is shown.



What is a use of fraction X?

- A** fuel for an aircraft
- B** fuel for an oil stove
- C** making roads
- D** making waxes

27 P, Q, R and S are four hydrocarbons.

P has no C=C double bonds.

Q is saturated.

R undergoes an addition reaction with steam.

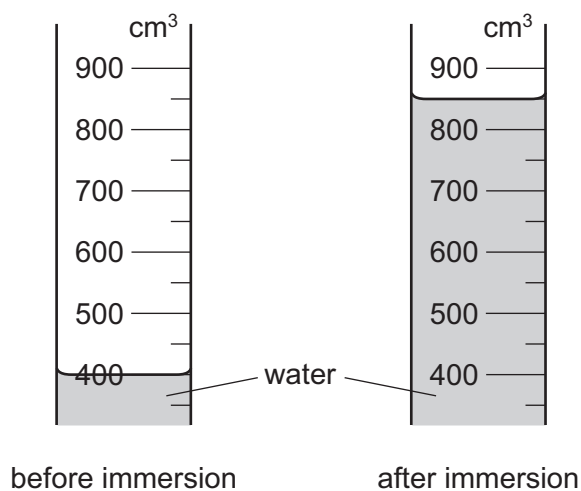
S can form an addition polymer.

Which row is correct?

	P	Q	R	S
A	ethane	ethene	propene	ethene
B	methane	ethane	ethene	propane
C	propane	methane	propene	ethene
D	propene	ethene	methane	ethane

- 28 The volume of an irregularly shaped solid object is measured by the method of displacement.

The water levels before and after the solid is added are shown.



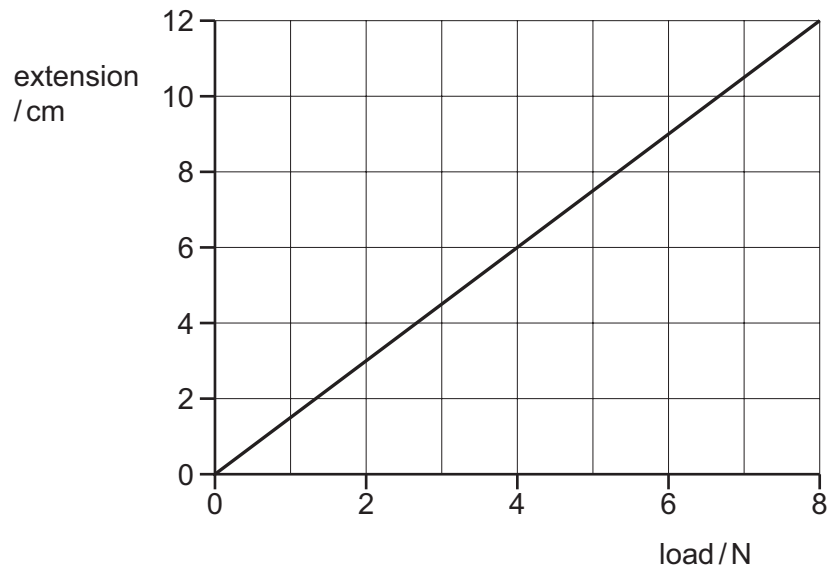
What is the volume of the irregularly shaped object?

- A 400 cm³ B 450 cm³ C 850 cm³ D 1250 cm³
- 29 A force is applied to an object moving at constant velocity.
- Which effect **cannot** occur?
- A It slows down.
 B It speeds up.
 C Its direction changes.
 D Its velocity remains constant.
- 30 An astronaut has a mass of 84.0 kg on the Earth where the gravitational field strength is 10 N/kg. He goes to Mars where the field strength is 38% of that on the Earth.

Which row is correct?

	mass on Mars /kg	weight on Mars /N
A	31.9	121
B	31.9	319
C	84.0	319
D	84.0	840

31 The diagram shows an extension-load graph for a spring.



The length of the spring with no load is 3 cm.

Which load gives the spring a length of 9 cm?

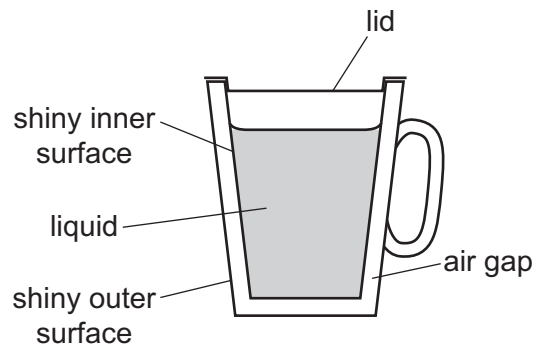
- A** 2 N **B** 4 N **C** 6 N **D** 8 N

32 Hydroelectric generation can be used to produce electricity from water stored behind a dam.

What is the correct order for the energy transfers during the production of electricity in this way?

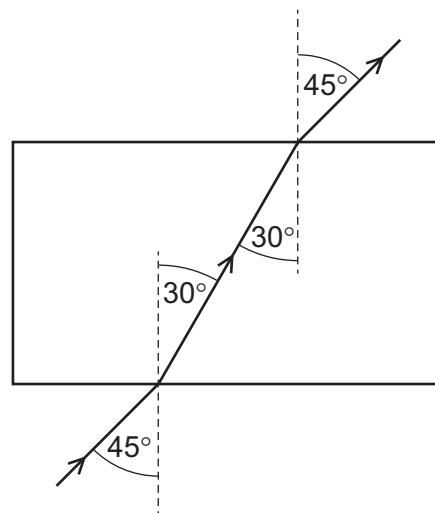
- A** kinetic energy of turbine → gravitational potential energy of water → kinetic energy of water → electrical energy
- B** gravitational potential energy of water → kinetic energy of water → kinetic energy of turbine → electrical energy
- C** gravitational potential energy of water → kinetic energy of turbine → kinetic energy of water → electrical energy
- D** kinetic energy of water → kinetic energy of turbine → gravitational potential energy of water → electrical energy

33 A liquid is kept hot in an insulated cup.



Which statement does **not** explain why the liquid stays hot?

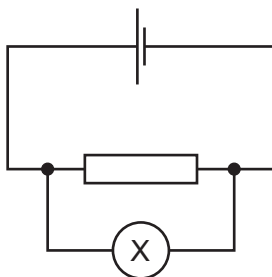
- A The trapped air in the gap reduces convection.
 - B The lid reduces convection.
 - C The shiny inner surface reflects infra-red radiation from the liquid.
 - D The shiny outer surface reflects infra-red radiation from the surroundings.
- 34 Which description could be a longitudinal wave?
- A an earthquake wave
 - B infra-red radiation
 - C vibrations on a guitar string
 - D X-rays
- 35 The diagram shows a ray of light passing through a transparent rectangular block.



What is the refractive index of the block for the light ray **entering** the block?

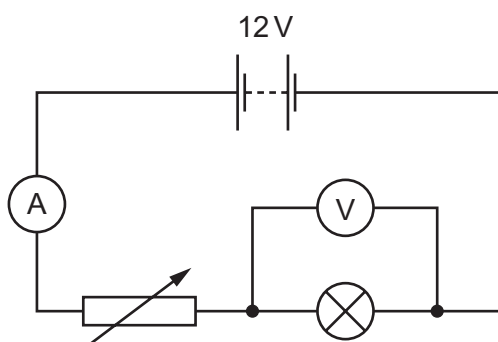
- A 0.71
- B 0.82
- C 1.41
- D 1.50

- 36 The diagram shows a voltmeter connected in parallel to a resistor in a circuit.



Which unit can be used for the quantity measured by the voltmeter?

- A** C/s **B** J/C **C** J/s **D** V/Ω
- 37 The circuit shown is used to determine the resistance of a lamp for two different brightness settings.



When the brightness of the lamp is low, the voltmeter reading is 2V and the ammeter reading is 2A.

When the brightness of the lamp is normal, the readings are 12V and 4A.

What is the increase in filament resistance?

- A** 1 Ω **B** 2 Ω **C** 3 Ω **D** 4 Ω
- 38 The wiring for a home appliance includes a switch and a fuse.

Where are these located?

	switch	fuse
A	live wire	live wire
B	live wire	neutral wire
C	neutral wire	live wire
D	neutral wire	neutral wire

39 In the nuclide notation A_ZX , what is represented by the letter Z?

- A the number of neutrons in the nuclide
- B the number of protons in the nuclide
- C the total number of neutrons and protons in the nuclide
- D the total number of protons and electrons in the nuclide

40 A smoke alarm in a home uses radioactive emissions that are easily absorbed. The detector needs to last for at least ten years before replacing.

Which nuclide is the best for use in a smoke detector?

	nuclide	radiation emitted	half-life
A	americium-241	alpha	432 years
B	cobalt-60	beta	5.27 years
C	potassium-40	beta	1.25×10^9 years
D	radium-223	alpha	11.5 days

BLANK PAGE

Permission to reproduce items where third-party owned material protected by copyright is included has been sought and cleared where possible. Every reasonable effort has been made by the publisher (UCLES) to trace copyright holders, but if any items requiring clearance have unwittingly been included, the publisher will be pleased to make amends at the earliest possible opportunity.

To avoid the issue of disclosure of answer-related information to candidates, all copyright acknowledgements are reproduced online in the Cambridge Assessment International Education Copyright Acknowledgements Booklet. This is produced for each series of examinations and is freely available to download at www.cambridgeinternational.org after the live examination series.

Cambridge Assessment International Education is part of the Cambridge Assessment Group. Cambridge Assessment is the brand name of the University of Cambridge Local Examinations Syndicate (UCLES), which itself is a department of the University of Cambridge.

The Periodic Table of Elements

Group																																																																																																																																																																																																																																																																																																																																																																																																																																																																																																																			
I	II	III	IV	V	VI	VII	VIII																																																																																																																																																																																																																																																																																																																																																																																																																																																																																																												
3 Li lithium 7	4 Be beryllium 9	1 H hydrogen 1	5 B boron 11	6 C carbon 12	7 N nitrogen 14	8 O oxygen 16	9 F fluorine 19	10 Ne neon 20																																																																																																																																																																																																																																																																																																																																																																																																																																																																																																											
11 Na sodium 23	12 Mg magnesium 24	Key atomic number atomic symbol name relative atomic mass		13 Al aluminium 27	14 Si silicon 28	15 P phosphorus 31	16 S sulfur 32	17 Cl chlorine 35.5	18 Ar argon 40																																																																																																																																																																																																																																																																																																																																																																																																																																																																																																										
19 K potassium 39	20 Ca calcium 40	21 Sc scandium 45	22 Ti titanium 48	23 V vanadium 51	24 Cr chromium 52	25 Mn manganese 55	26 Fe iron 56	27 Co cobalt 59	28 Ni nickel 59	29 Cu copper 64	30 Zn zinc 65	31 Ga gallium 70	32 Ge germanium 73	33 As arsenic 75	34 Se selenium 79	35 Br bromine 80	36 Kr krypton 84																																																																																																																																																																																																																																																																																																																																																																																																																																																																																																		
37 Rb rubidium 85	38 Sr strontium 88	39 Y yttrium 89	40 Zr zirconium 91	41 Nb niobium 93	42 Mo molybdenum 96	43 Tc technetium —	44 Ru ruthenium 101	45 Rh rhodium 103	46 Pd palladium 106	47 Ag silver 108	48 Cd cadmium 112	49 In indium 115	50 Sn tin 119	51 Sb antimony 122	52 Te tellurium 128	53 I iodine 127	54 Xe xenon 131																																																																																																																																																																																																																																																																																																																																																																																																																																																																																																		
55 Cs caesium 133	56 Ba barium 137	57–71 lanthanoids	72 Hf hafnium 178	73 Ta tantalum 181	74 W tungsten 184	75 Re rhenium 186	76 Os osmium 190	77 Ir iridium 192	78 Pt platinum 195	79 Au gold 197	80 Hg mercury 201	81 Tl thallium 204	82 Pb lead 207	83 Bi bismuth 209	84 Po polonium —	85 At astatine —	86 Rn radon —																																																																																																																																																																																																																																																																																																																																																																																																																																																																																																		
87 Fr francium —	88 Ra radium —	89–103 actinoids	104 Rf rutherfordium —	105 Db dubnium —	106 Sg seaborgium —	107 Bh bohrium —	108 Hs hassium —	109 Mt meitnerium —	110 Ds darmstadtium —	111 Rg roentgenium —	112 Cn copernicium —	114 Fl flerovium —	116 Lv livermorium —	118 Og oganeson —	119 Uue unbinilium —	120 Uub unbinilium —	121 Uut ununilium —	122 Uuq ununilium —	123 Uup ununilium —	124 Uuq ununilium —	125 Uup ununilium —	126 Uuq ununilium —	127 Uup ununilium —	128 Uuq ununilium —	129 Uup ununilium —	130 Uuq ununilium —	131 Uup ununilium —	132 Uuq ununilium —	133 Uup ununilium —	134 Uuq ununilium —	135 Uup ununilium —	136 Uuq ununilium —	137 Uup ununilium —	138 Uuq ununilium —	139 Uup ununilium —	140 Uuq ununilium —	141 Uup ununilium —	142 Uuq ununilium —	143 Uup ununilium —	144 Uuq ununilium —	145 Uup ununilium —	146 Uuq ununilium —	147 Uup ununilium —	148 Uuq ununilium —	149 Uup ununilium —	150 Uuq ununilium —	151 Uup ununilium —	152 Uuq ununilium —	153 Uup ununilium —	154 Uuq ununilium —	155 Uup ununilium —	156 Uuq ununilium —	157 Uup ununilium —	158 Uuq ununilium —	159 Uup ununilium —	160 Uuq ununilium —	161 Uup ununilium —	162 Uuq ununilium —	163 Uup ununilium —	164 Uuq ununilium —	165 Uup ununilium —	166 Uuq ununilium —	167 Uup ununilium —	168 Uuq ununilium —	169 Uup ununilium —	170 Uuq ununilium —	171 Uup ununilium —	172 Uuq ununilium —	173 Uup ununilium —	174 Uuq ununilium —	175 Uup ununilium —	176 Uuq ununilium —	177 Uup ununilium —	178 Uuq ununilium —	179 Uup ununilium —	180 Uuq ununilium —	181 Uup ununilium —	182 Uuq ununilium —	183 Uup ununilium —	184 Uuq ununilium —	185 Uup ununilium —	186 Uuq ununilium —	187 Uup ununilium —	188 Uuq ununilium —	189 Uup ununilium —	190 Uuq ununilium —	191 Uup ununilium —	192 Uuq ununilium —	193 Uup ununilium —	194 Uuq ununilium —	195 Uup ununilium —	196 Uuq ununilium —	197 Uup ununilium —	198 Uuq ununilium —	199 Uup ununilium —	200 Uuq ununilium —	201 Uup ununilium —	202 Uuq ununilium —	203 Uup ununilium —	204 Uuq ununilium —	205 Uup ununilium —	206 Uuq ununilium —	207 Uup ununilium —	208 Uuq ununilium —	209 Uup ununilium —	210 Uuq ununilium —	211 Uup ununilium —	212 Uuq ununilium —	213 Uup ununilium —	214 Uuq ununilium —	215 Uup ununilium —	216 Uuq ununilium —	217 Uup ununilium —	218 Uuq ununilium —	219 Uup ununilium —	220 Uuq ununilium —	221 Uup ununilium —	222 Uuq ununilium —	223 Uup ununilium —	224 Uuq ununilium —	225 Uup ununilium —	226 Uuq ununilium —	227 Uup ununilium —	228 Uuq ununilium —	229 Uup ununilium —	230 Uuq ununilium —	231 Uup ununilium —	232 Uuq ununilium —	233 Uup ununilium —	234 Uuq ununilium —	235 Uup ununilium —	236 Uuq ununilium —	237 Uup ununilium —	238 Uuq ununilium —	239 Uup ununilium —	240 Uuq ununilium —	241 Uup ununilium —	242 Uuq ununilium —	243 Uup ununilium —	244 Uuq ununilium —	245 Uup ununilium —	246 Uuq ununilium —	247 Uup ununilium —	248 Uuq ununilium —	249 Uup ununilium —	250 Uuq ununilium —	251 Uup ununilium —	252 Uuq ununilium —	253 Uup ununilium —	254 Uuq ununilium —	255 Uup ununilium —	256 Uuq ununilium —	257 Uup ununilium —	258 Uuq ununilium —	259 Uup ununilium —	260 Uuq ununilium —	261 Uup ununilium —	262 Uuq ununilium —	263 Uup ununilium —	264 Uuq ununilium —	265 Uup ununilium —	266 Uuq ununilium —	267 Uup ununilium —	268 Uuq ununilium —	269 Uup ununilium —	270 Uuq ununilium —	271 Uup ununilium —	272 Uuq ununilium —	273 Uup ununilium —	274 Uuq ununilium —	275 Uup ununilium —	276 Uuq ununilium —	277 Uup ununilium —	278 Uuq ununilium —	279 Uup ununilium —	280 Uuq ununilium —	281 Uup ununilium —	282 Uuq ununilium —	283 Uup ununilium —	284 Uuq ununilium —	285 Uup ununilium —	286 Uuq ununilium —	287 Uup ununilium —	288 Uuq ununilium —	289 Uup ununilium —	290 Uuq ununilium —	291 Uup ununilium —	292 Uuq ununilium —	293 Uup ununilium —	294 Uuq ununilium —	295 Uup ununilium —	296 Uuq ununilium —	297 Uup ununilium —	298 Uuq ununilium —	299 Uup ununilium —	300 Uuq ununilium —	301 Uup ununilium —	302 Uuq ununilium —	303 Uup ununilium —	304 Uuq ununilium —	305 Uup ununilium —	306 Uuq ununilium —	307 Uup ununilium —	308 Uuq ununilium —	309 Uup ununilium —	310 Uuq ununilium —	311 Uup ununilium —	312 Uuq ununilium —	313 Uup ununilium —	314 Uuq ununilium —	315 Uup ununilium —	316 Uuq ununilium —	317 Uup ununilium —	318 Uuq ununilium —	319 Uup ununilium —	320 Uuq ununilium —	321 Uup ununilium —	322 Uuq ununilium —	323 Uup ununilium —	324 Uuq ununilium —	325 Uup ununilium —	326 Uuq ununilium —	327 Uup ununilium —	328 Uuq ununilium —	329 Uup ununilium —	330 Uuq ununilium —	331 Uup ununilium —	332 Uuq ununilium —	333 Uup ununilium —	334 Uuq ununilium —	335 Uup ununilium —	336 Uuq ununilium —	337 Uup ununilium —	338 Uuq ununilium —	339 Uup ununilium —	340 Uuq ununilium —	341 Uup ununilium —	342 Uuq ununilium —	343 Uup ununilium —	344 Uuq ununilium —	345 Uup ununilium —	346 Uuq ununilium —	347 Uup ununilium —	348 Uuq ununilium —	349 Uup ununilium —	350 Uuq ununilium —	351 Uup ununilium —	352 Uuq ununilium —	353 Uup ununilium —	354 Uuq ununilium —	355 Uup ununilium —	356 Uuq ununilium —	357 Uup ununilium —	358 Uuq ununilium —	359 Uup ununilium —	360 Uuq ununilium —	361 Uup ununilium —	362 Uuq ununilium —	363 Uup ununilium —	364 Uuq ununilium —	365 Uup ununilium —	366 Uuq ununilium —	367 Uup ununilium —	368 Uuq ununilium —	369 Uup ununilium —	370 Uuq ununilium —	371 Uup ununilium —	372 Uuq ununilium —	373 Uup ununilium —	374 Uuq ununilium —	375 Uup ununilium —	376 Uuq ununilium —	377 Uup ununilium —	378 Uuq ununilium —	379 Uup ununilium —	380 Uuq ununilium —	381 Uup ununilium —	382 Uuq ununilium —	383 Uup ununilium —	384 Uuq ununilium —	385 Uup ununilium —	386 Uuq ununilium —	387 Uup ununilium —	388 Uuq ununilium —	389 Uup ununilium —	390 Uuq ununilium —	391 Uup ununilium —	392 Uuq ununilium —	393 Uup ununilium —	394 Uuq ununilium —	395 Uup ununilium —	396 Uuq ununilium —	397 Uup ununilium —	398 Uuq ununilium —	399 Uup ununilium —	400 Uuq ununilium —	401 Uup ununilium —	402 Uuq ununilium —	403 Uup ununilium —	404 Uuq ununilium —	405 Uup ununilium —	406 Uuq ununilium —	407 Uup ununilium —	408 Uuq ununilium —	409 Uup ununilium —	410 Uuq ununilium —	411 Uup ununilium —	412 Uuq ununilium —	413 Uup ununilium —	414 Uuq ununilium —	415 Uup ununilium —	416 Uuq ununilium —	417 Uup ununilium —	418 Uuq ununilium —	419 Uup ununilium —	420 Uuq ununilium —	421 Uup ununilium —	422 Uuq ununilium —	423 Uup ununilium —	424 Uuq ununilium —	425 Uup ununilium —	426 Uuq ununilium —	427 Uup ununilium —	428 Uuq ununilium —	429 Uup ununilium —	430 Uuq ununilium —	431 Uup ununilium —	432 Uuq ununilium —	433 Uup ununilium —	434 Uuq ununilium —	435 Uup ununilium —	436 Uuq ununilium —	437 Uup ununilium —	438 Uuq ununilium —	439 Uup ununilium —	440 Uuq ununilium —	441 Uup ununilium —	442 Uuq ununilium —	443 Uup ununilium —	444 Uuq ununilium —	445 Uup ununilium —	446 Uuq ununilium —	447 Uup ununilium —	448 Uuq ununilium —	449 Uup ununilium —	450 Uuq ununilium —	451 Uup ununilium —	452 Uuq ununilium —	453 Uup ununilium —	454 Uuq ununilium —	455 Uup ununilium —	456 Uuq ununilium —	457 Uup ununilium —	458 Uuq ununilium —	459 Uup ununilium —	460 Uuq ununilium —	461 Uup ununilium —	462 Uuq ununilium —	463 Uup ununilium —	464 Uuq ununilium —	465 Uup ununilium —	466 Uuq ununilium —	467 Uup ununilium —	468 Uuq ununilium —	469 Uup ununilium —	470 Uuq ununilium —	471 Uup ununilium —	472 Uuq ununilium —	473 Uup ununilium —	474 Uuq ununilium —	475 Uup ununilium —	476 Uuq ununilium —	477 Uup ununilium —	478 Uuq ununilium —	479 Uup ununilium —	480 Uuq ununilium —	481 Uup ununilium —	482 Uuq ununilium —	483 Uup ununilium —	484 Uuq ununilium —	485 Uup ununilium —	486 Uuq ununilium —	487 Uup ununilium —	488 Uuq ununilium —	489 Uup ununilium —	490 Uuq ununilium —	491 Uup ununilium —	492 Uuq ununilium —	493 Uup ununilium —	494 Uuq ununilium —	495 Uup ununilium —	496 Uuq ununilium —	497 Uup ununilium —	498 Uuq ununilium —	499 Uup ununilium —	500 Uuq ununilium —	501 Uup ununilium —	502 Uuq ununilium —	503 Uup ununilium —	504 Uuq ununilium —	505 Uup ununilium —	506 Uuq ununilium —	507 Uup ununilium —	508 Uuq ununilium —	509 Uup ununilium —	510 Uuq ununilium —	511 Uup ununilium —	512 Uuq ununilium —	513 Uup ununilium —	514 Uuq ununilium —	515 Uup ununilium —	516 Uuq ununilium —	517 Uup ununilium —	518 Uuq ununilium —	519 Uup ununilium —	520 Uuq ununilium —	521 Uup ununilium —	522 Uuq ununilium —	523 Uup ununilium —	524 Uuq ununilium —	525 Uup ununilium —	526 Uuq ununilium —	527 Uup ununilium —	528 Uuq ununilium —	529 Uup ununilium —	530 Uuq ununilium —	531 Uup ununilium —	532 Uuq ununilium —	533 Uup ununilium —	534 Uuq ununilium —	535 Uup ununilium —	536 Uuq ununilium —	537 Uup ununilium —	538 Uuq ununilium —	539 Uup ununilium —	540 Uuq ununilium —	541 Uup ununilium —	542 Uuq ununilium —	543 Uup ununilium —	544 Uuq ununilium —	545 Uup ununilium —	546 Uuq ununilium —	547 Uup ununilium —	548 Uuq ununilium —	549 Uup ununilium —	550 Uuq ununilium —	551 Uup ununilium —	552 Uuq ununilium —	553 Uup ununilium —	554 Uuq ununilium —	555 Uup ununilium —	556 Uuq ununilium —	557 Uup ununilium —	558 Uuq ununilium —	559 Uup ununilium —	560 Uuq ununilium —	561 Uup ununilium —	562 Uuq ununilium —	563 Uup ununilium —	564 Uuq ununilium —	565 Uup ununilium —	566 Uuq ununilium —	567 Uup ununilium —	568 Uuq ununilium —	569 Uup ununilium —	570 Uuq ununilium —	571 Uup ununilium —	572 Uuq ununilium —	573 Uup ununilium —	574 Uuq ununilium —	575 Uup ununilium —	576 Uuq ununilium —	577 Uup ununilium —	578 Uuq ununilium —	579 Uup ununilium —	580 Uuq ununilium —	581 Uup ununilium —	582 Uuq ununilium —	583 Uup ununilium —	584 Uuq ununilium —	585 Uup ununilium —	586 Uuq ununilium —	587 Uup ununilium —	588 Uuq ununilium —	589 Uup ununilium —	590 Uuq ununilium —	591 Uup ununilium —	592 Uuq ununilium —	593 Uup ununilium —	594 Uuq ununilium —	595 Uup ununilium —	596 Uuq ununilium —	597 Uup ununilium —	598 Uuq ununilium —	599 Uup ununilium —	600 Uuq ununilium —	601 Uup ununilium —	602 Uuq ununilium —	603