



UNIVERSITY OF CAMBRIDGE INTERNATIONAL EXAMINATIONS
General Certificate of Education Ordinary Level

CANDIDATE
NAME

CENTRE
NUMBER

--	--	--	--	--

CANDIDATE
NUMBER

--	--	--	--



PHYSICS

5054/42

Paper 4 Alternative to Practical

October/November 2012

1 hour

Candidates answer on the Question Paper.

No Additional Materials are required.

READ THESE INSTRUCTIONS FIRST

Write your Centre number, candidate number and name on all the work you hand in.

Write in dark blue or black pen.

You may use a soft pencil for any diagrams, graphs or rough working.

Do not use staples, paper clips, highlighters, glue or correction fluid.

DO NOT WRITE IN ANY BARCODES.

Answer **all** questions.

You may lose marks if you do not show your working or if you do not use appropriate units.

At the end of the examination, fasten all your work securely together.

The number of marks is given in brackets [] at the end of each question or part question.

For Examiner's Use	
1	
2	
3	
4	
Total	

This document consists of **12** printed pages.



- 1 A student investigates the speed of water waves.

A rectangular plastic tray has a layer of water in the bottom, as shown in Fig. 1.1.

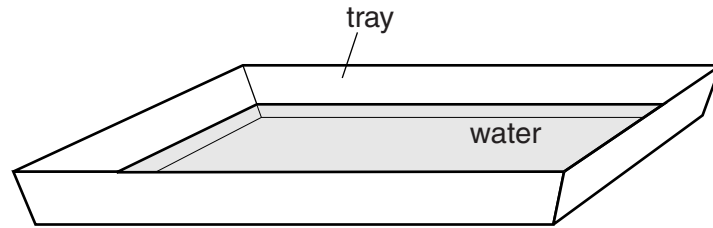


Fig. 1.1

One end of the tray is lifted gently a small distance, as shown in Fig. 1.2a. When the water is still, the tray is lowered quickly. This causes a wave to travel across the surface of the water, as shown in Fig. 1.2b.

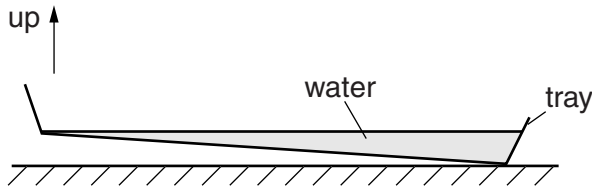


Fig. 1.2a

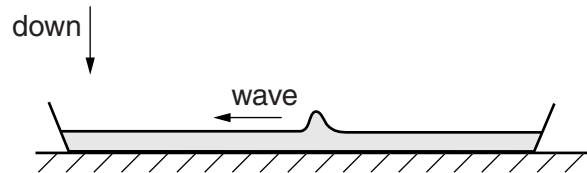


Fig. 1.2b

The wave is reflected by the ends of the tray and travels backwards and forwards several times.

- (a) The student estimates the time for the wave to travel one length of the tray to be about one second.

Suggest a reason why the student decides to measure the time for the wave to travel five lengths of the tray.

.....
 [1]

- (b) The ends of the tray slope outwards.

- (i) Explain why this makes it difficult to measure accurately the distance travelled by the wave.

.....
 [1]

- (ii) Describe a possible method of measuring the distance travelled by the wave. You may use a diagram in your answer.

.....
..... [1]

- (c) The student measures the depth d of the water. He has two identical 30cm rulers. Part of one ruler is shown in Fig. 1.3.

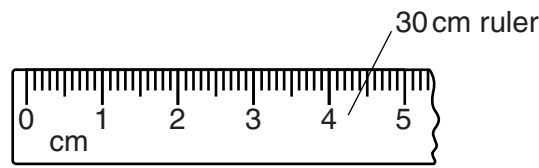


Fig. 1.3

- (i) Explain why it is difficult to measure d using only one of these rulers.

.....
..... [1]

- (ii) Describe a method of measuring d using the two rulers. You may use a diagram in your answer.

.....
..... [2]

- (d) The student repeats the experiment for different values of d and calculates the speed v of the wave for each value of d .

Fig. 1.4 shows the student's results.

For
Examiner's
Use

d/cm	$v/(\text{cm/s})$
0.5	20.6
1.0	28.5
1.5	35.5
2.0	42.0
2.5	46.3
3.0	50.5

Fig. 1.4

- (i) On Fig. 1.5, plot the graph of $v/(\text{cm/s})$ on the y -axis against d/cm on the x -axis. Start your graph at $v = 20\text{ cm/s}$ and $d = 0$. Draw a smooth curve of best fit.

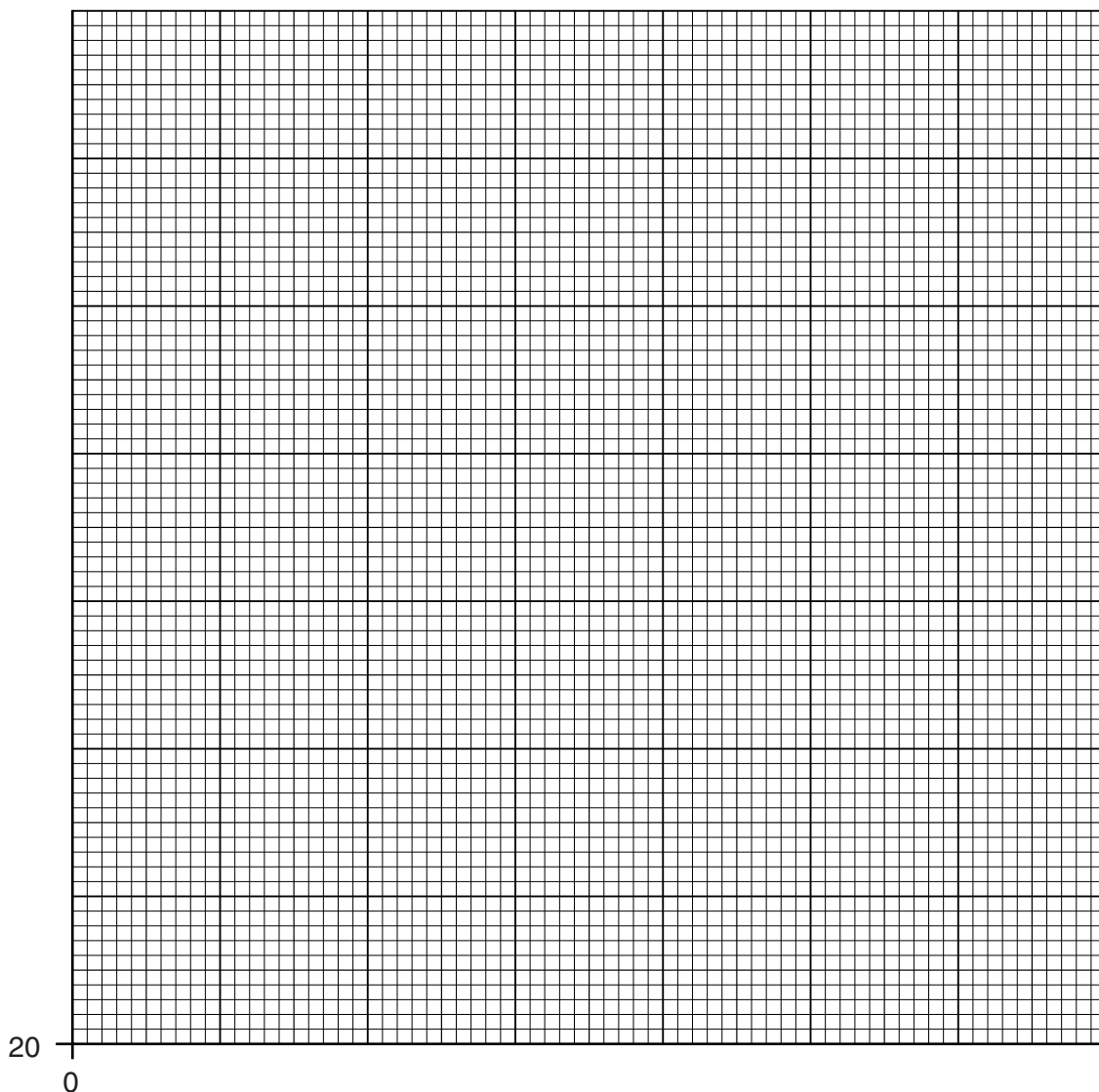


Fig. 1.5

[4]

- (ii) Suggest a possible reason why the student cannot take readings for d greater than 3.0 cm.

*For
Examiner's
Use*

.....
..... [1]

- (iii) Using your graph, suggest how the speed varies with depth for very large values of d .

.....
..... [1]

- 2 A student uses an electric kettle to measure the specific heat capacity of water.

Fig. 2.1 shows a kettle containing 1.0 kg of water.

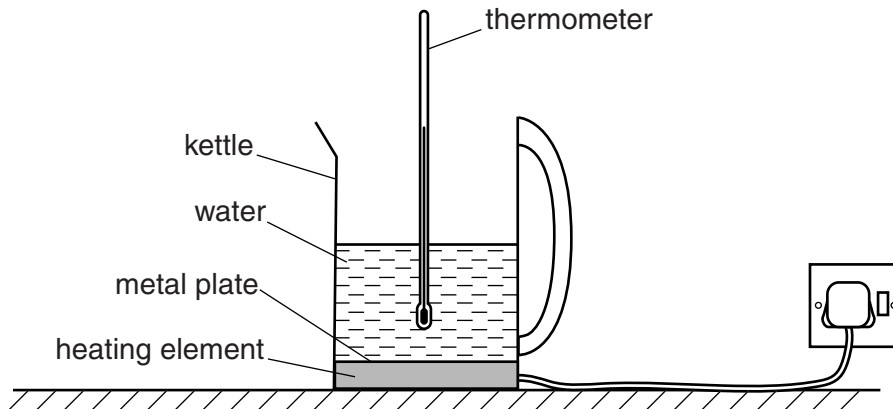


Fig. 2.1

The kettle has a label on the base, as shown in Fig. 2.2.

<p>2755 – 3000 W 230 – 240 V</p>

Fig. 2.2

The initial temperature of the water is 19 °C. The kettle is switched on for 1.0 minute and the final temperature of the water is 53 °C.

- (a) The relationship

$$\text{power} \times \text{time} = \text{mass} \times \text{specific heat capacity} \times \text{temperature change}$$

is used to find the specific heat capacity of water.

Use the relationship and the given data to find the smallest possible value for the specific heat capacity c of water.

Give your answer to a suitable number of significant figures.

$$c = \dots\dots\dots \text{ J}/(\text{kg } ^\circ\text{C}) \text{ [3]}$$

(b) (i) Explain why the water should be stirred before reading the thermometer.

.....
..... [1]

(ii) Explain why the thermometer should not touch the metal plate when measuring the temperature of the water.

.....
..... [1]

(c) The student's answer for *c* is larger than the accepted value.
Suggest a reason why this answer is too large.

.....
..... [1]

- 3 A student investigates the behaviour of a pendulum.

Fig. 3.1 shows the pendulum hanging from a fixed support.

For
Examiner's
Use

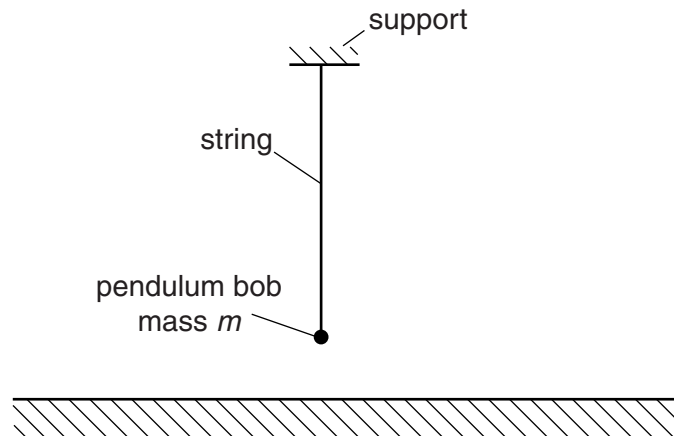


Fig. 3.1

The mass of the pendulum bob is m .

The student measures the time t for 10 complete swings of the pendulum for different values of m .

She starts with $m = 20\text{ g}$ and increases m in 20 g steps up to 100 g .

The values obtained for t , in order, are 16.32 s , 16.28 s , 16.38 s , 16.44 s , 16.35 s .

- (a) In the space below, draw a table of results for this experiment.

[3]

(b) Using the results from the table,

For
Examiner's
Use

(i) comment on whether m affects t ,

.....
..... [1]

(ii) suggest further readings the student can take so that a more reliable comment can be made.

.....
..... [1]

4 A student investigates the deviation of a ray of light by a prism.

A ray of red light passes through the prism. The student places pins P_1 and P_2 on the incident ray and pins P_3 and P_4 on the emergent ray.

Fig. 4.1 on page 11 shows the positions of the pins and the prism.

(a) (i) On Fig. 4.1, draw a straight line through P_1 and P_2 .
Continue this line through the prism. [1]

(ii) On Fig. 4.1, draw a straight line through P_3 and P_4 .
Continue this line to cross the line drawn in (i). [1]

(iii) Measure the smaller angle between the line drawn in (i) and the line drawn in (ii).

angle = [1]

(iv) On Fig. 4.1, draw a line to represent the actual path of the ray through the prism. [1]

(b) Suggest why the student uses red light and not white light in this experiment.

.....
..... [1]

Question 4 continues on page 12.

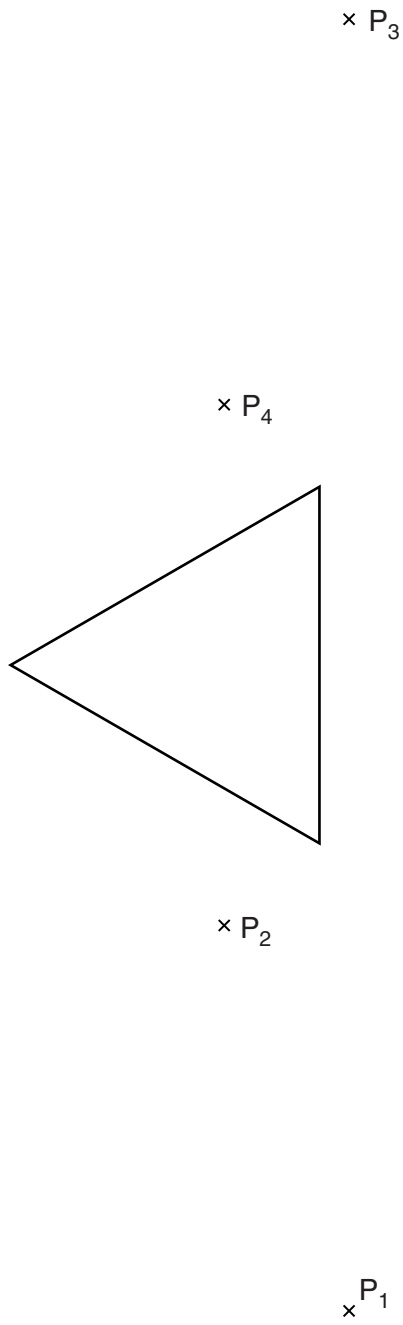


Fig. 4.1

- (c) In a different experiment, the student is asked to draw the normal at the point where an incident ray strikes a prism.

For
Examiner's
Use

The student draws a line, as shown in Fig. 4.2.

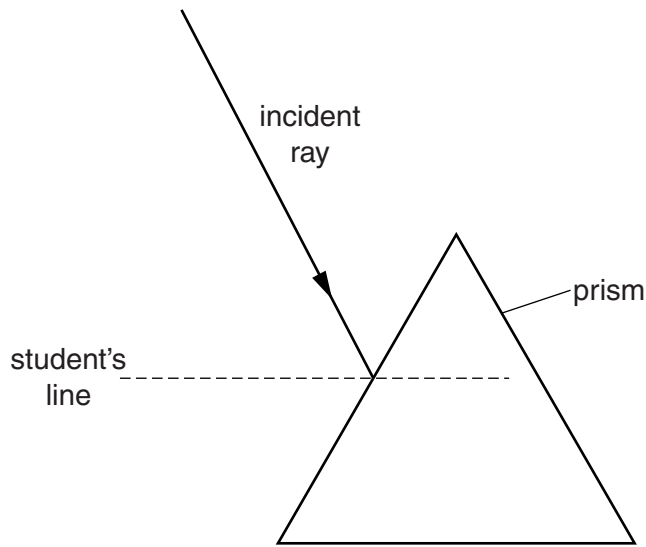


Fig. 4.2

- (i) Explain why the student's line is not the normal.

.....
 [1]

- (ii) On Fig. 4.2, draw the correct normal. Measure the angle of incidence i .

$i =$ [1]

Permission to reproduce items where third-party owned material protected by copyright is included has been sought and cleared where possible. Every reasonable effort has been made by the publisher (UCLES) to trace copyright holders, but if any items requiring clearance have unwittingly been included, the publisher will be pleased to make amends at the earliest possible opportunity.

University of Cambridge International Examinations is part of the Cambridge Assessment Group. Cambridge Assessment is the brand name of University of Cambridge Local Examinations Syndicate (UCLES), which is itself a department of the University of Cambridge.