



UNIVERSITY OF CAMBRIDGE INTERNATIONAL EXAMINATIONS
General Certificate of Education Ordinary Level

GEOGRAPHY

2217/23

Paper 2

October/November 2011

INSERT

2 hours 15 minutes

READ THESE INSTRUCTIONS FIRST

This Insert contains Photograph A for Question 2, Figs 8 and 10 for Question 7, and Tables 5 and 6 for Question 8.

The Insert is **not** required by the Examiner.

This document consists of **6** printed pages and **2** blank pages.

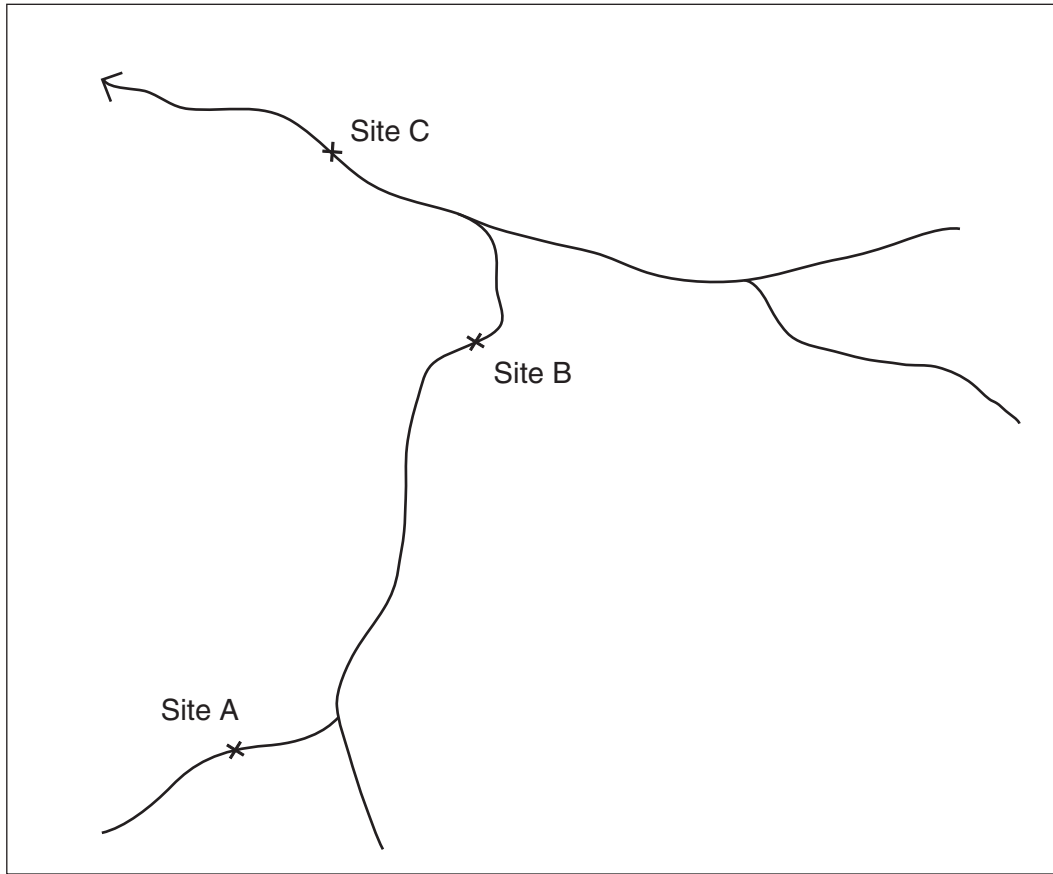


Photograph A for Question 2



Fig. 8 for Question 7

Three investigation sites

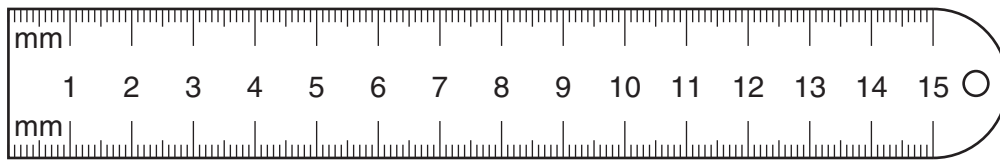


Key
— river
x investigation site

0 5
km

Fig. 10 for Question 7

Equipment used to test Hypothesis 2



Roundness score chart







Shape						
Score	0	1	2	3	4	5
Description	very angular	angular	a little angular	a little rounded	rounded	very rounded

Table 5 for Question 8

Results of traffic count at eight sites

Time			08.00		17.00		
Survey site	Location	Distance from town centre (km)	Going towards town centre	Going away from town centre	Going towards town centre	Going away from town centre	Total
1	Queens Road	1	92	41	46	106	285
2	Queens Road	3	90	45	42	101	278
3	Wellington Drive	1	21	11	14	24	70
4	Wellington Drive	3	24	14	14	26	78
5	Robertson Drive	1	33	21	22	39	115
6	Robertson Drive	3	30	16	19	35	100
7	Cambridge Road	1	108	47	49	112	316
8	Cambridge Road	3	106	51	54	109	320

Table 6 for Question 8

Results of traffic count at four sites further from the town centre

Time		8.00		17.00	
Survey site	Location	Going towards town centre	Going away from town centre	Going towards town centre	Going away from town centre
2	Queens Road	90	45	42	101
4	Wellington Drive	24	14	14	26
6	Robertson Drive	30	16	19	35
8	Cambridge Road	106	51	54	109
	Total	250	126	129	271

