



UNIVERSITY OF CAMBRIDGE INTERNATIONAL EXAMINATIONS  
General Certificate of Education Ordinary Level

---

**GEOGRAPHY**

**2217/02**

Paper 2

**May/June 2007**

INSERT

**2 hours 15 minutes**

---

**READ THESE INSTRUCTIONS FIRST**

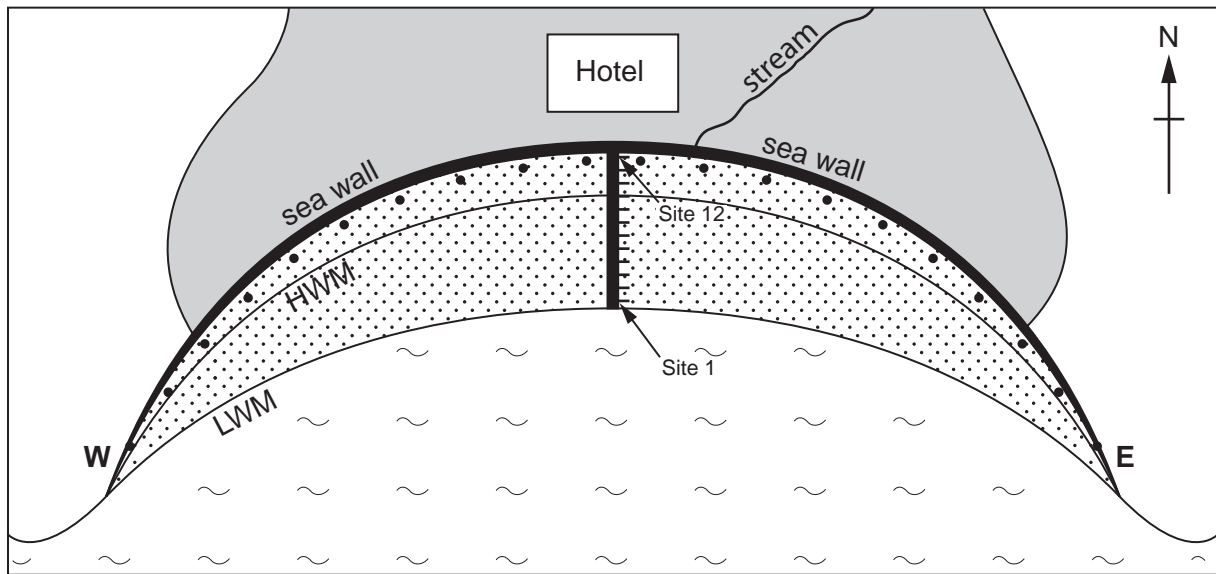
This Insert contains Fig. 9 for Question 7.




---

This document consists of **2** printed pages.



Sketch map of the local beach and the investigation sites



- Key**
- point for observing 'other material'
  -  urban area
  -  local beach
  - HWM high water mark
  - LWM low water mark
  -  beach material transect line

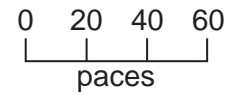


Fig. 9 for Question 7