

CANDIDATE
NAME


--

CENTRE
NUMBER

--	--	--	--	--

CANDIDATE
NUMBER

--	--	--	--



CHEMISTRY

Paper 2 Theory

5070/22

May/June 2018

1 hour 30 minutes

Candidates answer on the Question Paper.

No Additional Materials are required.

READ THESE INSTRUCTIONS FIRST

Write your Centre number, candidate number and name on all the work you hand in.

Write in dark blue or black pen.

You may use an HB pencil for any diagrams or graphs.

Do not use staples, paper clips, glue or correction fluid.

DO **NOT** WRITE IN ANY BARCODES.

Section A

Answer **all** questions.

Write your answers in the spaces provided in the Question Paper.

Section B

Answer any **three** questions.

Write your answers in the spaces provided in the Question Paper.

Electronic calculators may be used.

You may lose marks if you do not show your working or if you do not use appropriate units.

A copy of the Periodic Table is printed on page 20.

At the end of the examination, fasten all your work securely together.

The number of marks is given in brackets [] at the end of each question or part question.

This document consists of **18** printed pages and **2** blank pages.

Section A

Answer **all** the questions in this section in the spaces provided.

The total mark for this section is 45.

1 Choose from the gases to answer the questions.

ammonia
carbon dioxide
chlorine
butane
hydrogen
nitrogen
oxygen
propane
sulfur dioxide

Each gas can be used once, more than once or not at all.

Which gas:

(a) burns in air to give only water

..... [1]

(b) is used to kill bacteria in the purification of water for domestic use

..... [1]

(c) has a molecule containing only 11 atoms

..... [1]

(d) occupies 78% by volume of dry air

..... [1]

(e) is released when calcium hydroxide is added to soil that contains the fertiliser ammonium nitrate?

..... [1]

[Total: 5]

2 The transition elements occupy the central block of the Periodic Table.

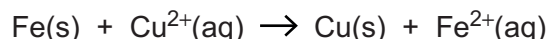
Iron and copper are typical transition elements.

(a) The compounds of transition elements are often coloured.

What is the colour of iron(III) hydroxide?

.....[1]

(b) A redox reaction happens when iron filings are added to aqueous copper(II) sulfate.



(i) Describe what is observed during this reaction.

.....
[2]

(ii) Use the equation to explain that oxidation takes place in this reaction.

.....
[1]

(iii) Use the equation to explain that reduction takes place in this reaction.

.....
[1]

(c) Compounds containing ions of transition elements are often used as catalysts.

Name a catalyst that is the compound of a transition element and state the reaction it catalyses.

name

reaction

.....[1]

(d) Catalysts increase the rate of reaction by providing an alternative reaction pathway with a lower activation energy.

Explain why catalysts are used in industry.

.....
[1]

[Total: 7]

3 Silver chloride, AgCl , is an insoluble salt and silver nitrate is a soluble salt.

(a) Silver chloride can be prepared by the reaction between aqueous silver nitrate and dilute hydrochloric acid.

(i) Describe the preparation of a pure, dry sample of silver chloride from aqueous silver nitrate and dilute hydrochloric acid.

.....
.....
.....
.....
.....[3]

(ii) Write the ionic equation, including state symbols, for this reaction.

.....[2]

(b) Silver chloride decomposes in the presence of light to make silver and chlorine.

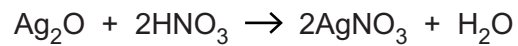
(i) What is the name of the type of reaction that requires light?

.....[1]

(ii) Construct the equation for the decomposition of silver chloride.

.....[1]

(c) Silver nitrate can be prepared by reacting silver oxide with dilute nitric acid.



Excess silver oxide is reacted with 30.0 cm³ of 0.150 mol/dm³ nitric acid.

After purification the percentage yield of silver nitrate is 80.0%.

Calculate the mass of silver nitrate prepared.

Give your answer to **three** significant figures.

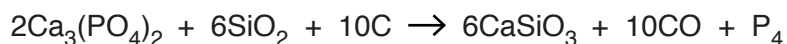
[*M_r*: AgNO₃, 170]

mass of silver nitrate g [3]

[Total: 10]

4 Phosphorus is a non-metal in Group V of the Periodic Table.

(a) Phosphorus can be manufactured from calcium phosphate, $\text{Ca}_3(\text{PO}_4)_2$.



What is the maximum mass of phosphorus that can be made using 300g of silicon dioxide, SiO_2 ?

mass of phosphorus g [2]

(b) Phosphorus, P_4 , is a simple molecular substance.

Suggest **two** physical properties of phosphorus.

1

2 [2]

(c) Using ideas about structure and bonding, suggest why calcium phosphate, $\text{Ca}_3(\text{PO}_4)_2$, has a high melting point.

.....

.....

.....

..... [2]

(d) Complete the table about the number of electrons, neutrons and protons in two particles.

particle	$^{30}_{15}\text{P}$
number of electrons	18
number of neutrons	16
number of protons	15

[2]

[Total: 8]

5 Naphtha is a fraction obtained from petroleum (crude oil).

(a) Explain how naphtha is obtained from petroleum (crude oil).

.....
.....
.....
.....
.....
.....
..... [3]

(b) One compound in the naphtha fraction has the formula $C_{12}H_{26}$.

(i) From this formula, how can you deduce that this compound is an alkane?

.....
.....
..... [1]

(ii) The alkane, $C_{12}H_{26}$, can be cracked to form an alkene that has six carbon atoms per molecule.

Construct the equation for this reaction.

..... [2]

(c) Ethene, C_2H_4 , can be made by cracking hydrocarbons.

Draw a 'dot-and-cross' diagram for ethene.

You only need to show the outer shell electrons.

[2]

(d) Chlorine reacts with both ethene and ethane.

(i) One molecule of ethene reacts with one molecule of chlorine.

Draw the structure of the product of this reaction. Show all of the atoms and all of the bonds.

[1]

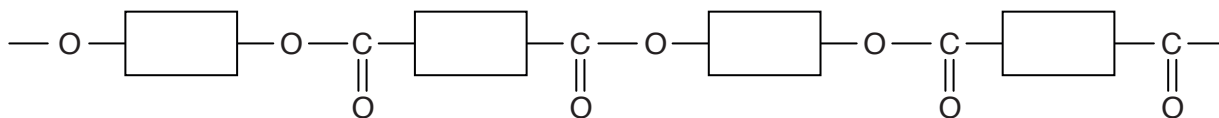
(ii) One molecule of ethane can react with two molecules of chlorine.

What is the molecular formula of the organic product of this reaction?

.....[1]

[Total: 10]

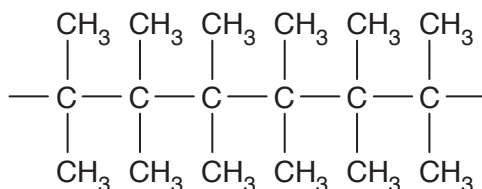
6 The diagram shows the partial structure of a polyester.



(a) Draw the partial structure of nylon.

[1]

(b) The diagram shows the partial structure of an addition polymer.



(i) What is meant by the term *addition polymerisation*?

.....

 [2]

(ii) Draw the structure of the alkene that can be used to make this addition polymer.

[1]

(iii) Describe one pollution problem associated with the disposal of this addition polymer.

.....
 [1]

[Total: 5]

Section B

Answer **three** questions from this section in the spaces provided.

The total mark for this section is 30.

7 Sphalerite is an ore containing compounds of zinc. One of the compounds in the ore is ZnS.

(a) Calculate the mass of zinc in 30.0 tonnes of ZnS.

mass of zinc tonnes [2]

(b) ZnS is heated in air. Zinc oxide and sulfur dioxide are formed.

(i) Construct the equation for this reaction.

.....[2]

(ii) Suggest one environmental problem involved with heating ZnS in air.

.....
[1]

(c) Zinc oxide is reacted with dilute sulfuric acid to form aqueous zinc sulfate.

Construct the equation for this reaction.

.....[1]

(d) Pure zinc is made by the electrolysis of aqueous zinc sulfate.

Zinc forms at the negative electrode. Hydroxide ions react at the positive electrode.

Construct the equations for the reactions at both electrodes.

positive electrode (anode)

negative electrode (cathode)

[2]

(e) Zinc is used to galvanise iron to prevent the iron from rusting.

Explain how galvanising prevents iron from rusting.

.....

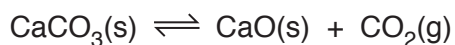
.....

.....

..... [2]

[Total: 10]

- 8 A scientist investigates the thermal decomposition of calcium carbonate in a closed system.
A dynamic equilibrium mixture is established.



- (a) What is meant by the term *dynamic equilibrium*?

.....
.....
.....
..... [2]

- (b) The pressure of the equilibrium mixture is decreased.

The temperature of the closed system is kept constant.

Predict and explain what will happen to the composition of the equilibrium mixture.

.....
.....
.....
..... [2]

- (c) The temperature of the equilibrium mixture is increased.

The pressure within the closed system is kept constant.

The position of equilibrium shifts to the right hand side.

What conclusion can be made about the enthalpy change of the reaction?

.....
..... [1]

(d) Calcium carbonate reacts with dilute nitric acid to form three compounds, **X**, **Y** and **Z**.

- **X** is a salt.
- **Y** is a colourless gas.
- **Z** is a colourless liquid.

(i) Name **Y** and describe a test for this gas.

name

test

observation

[2]

(ii) Name **Z** and describe a chemical test for this liquid.

name

chemical test

observation

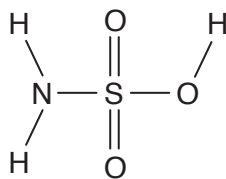
[2]

(iii) Construct the equation for the reaction between calcium carbonate and nitric acid.

.....[1]

[Total: 10]

9 Sulfamic acid has the structure shown.



(a) Write the molecular formula for sulfamic acid.

.....[1]

(b) Sulfamic acid is a weak acid.

(i) What is meant by the term *acid*?

.....
[1]

(ii) What is the difference between a weak acid and a strong acid?

.....

[2]

(c) What mass of sulfamic acid is required to make 250 cm³ of a 0.150 mol/dm³ solution?

mass g [3]

(d) In a titration, 0.00250 moles of NaOH is exactly neutralised by 0.150 mol/dm³ sulfamic acid.

One mole of sodium hydroxide reacts with one mole of sulfamic acid.

Calculate the volume, in cm³, of sulfamic acid needed in this titration.

volume cm³ [1]

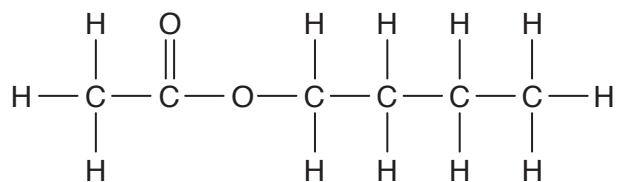
(e) One mole of aqueous sulfamic acid can produce one mole of hydrogen ions.

Construct the equation to show the reaction between sulfamic acid and magnesium.

..... [2]

[Total: 10]

10 Ester **A** has the structure shown.



(a) Name ester **A**.

.....[1]

(b) Ester **A** reacts with hot aqueous sodium hydroxide to give two compounds, **B** and **C**.

(i) Compound **B** has the percentage composition by mass:

29.3% carbon; 3.7% hydrogen; 39.0% oxygen; 28.0% sodium.

Calculate the empirical formula for this compound.

[2]

(ii) Compound **C** has a relative molecular mass of 74 and is oxidised by warm acidified potassium manganate(VII) to give butanoic acid.

Suggest a structure for **C**.

Give reasons for your answer.

.....

[2]

(c) (i) What is meant by the term *isomerism*?

.....
.....[1]

(ii) Draw an isomer of ester **A**.

[1]

(d) Explain why ester **A** is a saturated compound.

.....
.....[1]

(e) Ester **A** can be used as a fragrance or perfume because it diffuses easily.

(i) Explain why the rate of diffusion of the ester decreases as the temperature decreases.

.....
.....
.....[1]

(ii) Suggest **one** other use for ester **A**.

.....[1]

[Total: 10]

BLANK PAGE

Permission to reproduce items where third-party owned material protected by copyright is included has been sought and cleared where possible. Every reasonable effort has been made by the publisher (UCLES) to trace copyright holders, but if any items requiring clearance have unwittingly been included, the publisher will be pleased to make amends at the earliest possible opportunity.

To avoid the issue of disclosure of answer-related information to candidates, all copyright acknowledgements are reproduced online in the Cambridge International Examinations Copyright Acknowledgements Booklet. This is produced for each series of examinations and is freely available to download at www.cie.org.uk after the live examination series.

Cambridge International Examinations is part of the Cambridge Assessment Group. Cambridge Assessment is the brand name of University of Cambridge Local Examinations Syndicate (UCLES), which is itself a department of the University of Cambridge.

