
CHEMISTRY

5070/11

Paper 1 Multiple Choice

May/June 2015

1 hour

Additional Materials: Multiple Choice Answer Sheet
 Soft clean eraser
 Soft pencil (type B or HB is recommended)

READ THESE INSTRUCTIONS FIRST

Write in soft pencil.

Do not use staples, paper clips, glue or correction fluid.

Write your name, Centre number and candidate number on the Answer Sheet in the spaces provided unless this has been done for you.

DO NOT WRITE IN ANY BARCODES.

There are **forty** questions on this paper. Answer **all** questions. For each question there are four possible answers **A, B, C** and **D**.

Choose the **one** you consider correct and record your choice in **soft pencil** on the separate Answer Sheet.

Read the instructions on the Answer Sheet very carefully.

Each correct answer will score one mark. A mark will not be deducted for a wrong answer.

Any rough working should be done in this booklet.

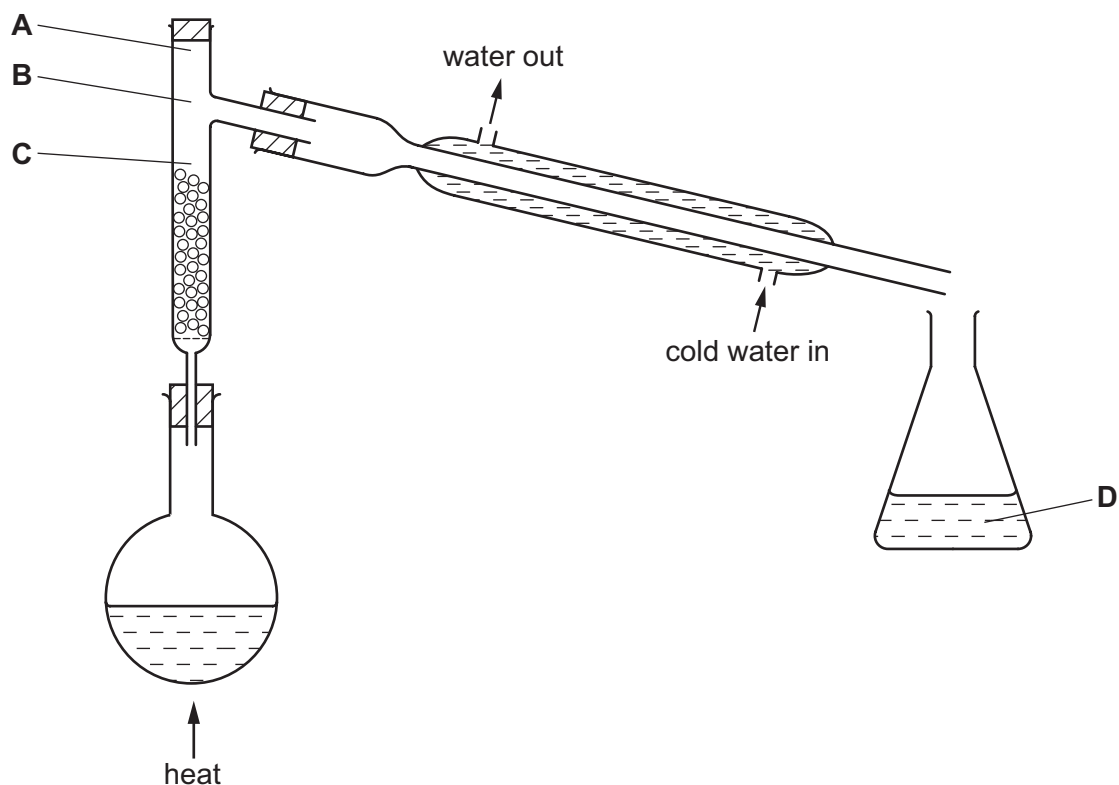
A copy of the Periodic Table is printed on page 16.

Electronic calculators may be used.

This document consists of **13** printed pages and **3** blank pages.

- 1 The fractional distillation apparatus shown is being used to separate a mixture of two liquids. A thermometer is missing from the apparatus.

Where should the bulb of the thermometer be placed?



- 2 The table shows the results of two reactions of an aqueous solution of a salt.

reagents	final observation
excess aqueous sodium hydroxide	white precipitate
dilute nitric acid and aqueous silver nitrate	yellow precipitate

What is the name of the salt?

- A calcium chloride
- B calcium iodide
- C zinc nitrate
- D zinc sulfate

3 Limestone reacts with hydrochloric acid.

Changing which reaction condition does **not** affect the rate of reaction?

- A concentration of the acid
- B limestone particle size
- C pressure
- D temperature

4 A particle contains 34 protons, 45 neutrons and 36 electrons.

Which symbol is correct for this particle?

- A ${}_{34}^{79}\text{Se}$ B ${}_{34}^{79}\text{Se}^{-}$ C ${}_{34}^{79}\text{Se}^{2-}$ D ${}_{34}^{79}\text{Se}^{2+}$

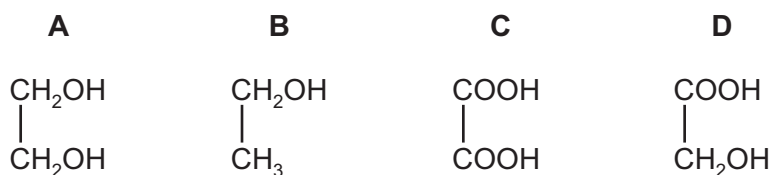
5 Which molecule contains **three** shared pairs of electrons between two of its atoms?

- A CO_2 B C_2H_4 C H_2O D N_2

6 What happens when sodium chloride melts?

- A Covalent bonds in a giant lattice are broken.
- B Electrons are released from atoms.
- C Electrostatic forces of attraction between ions are overcome.
- D Molecules are separated into ions.

7 Which compound contains only eight covalent bonds?



8 Which substance has metallic bonding?

	conducts electricity		state of product formed on reaction with oxygen
	when solid	when liquid	
A	✓	✓	solid
B	✓	✓	gas
C	x	✓	no reaction
D	x	x	solid

9 A gas cylinder is placed in each of the four corners of a square room. Each cylinder contains a different gas stored under the same pressure. The gases are released at exactly the same time.

Which gas will reach the centre of the room first?

- A** ammonia, NH_3
- B** argon, Ar
- C** carbon monoxide, CO
- D** chlorine, Cl_2

10 Powdered calcium carbonate reacts with dilute hydrochloric acid to produce calcium chloride, water and carbon dioxide.


Which is the correct ionic equation, including state symbols, for this reaction?

- A** $\text{CaCO}_3(\text{s}) + 2\text{HCl}(\text{aq}) \rightarrow \text{CaCl}_2(\text{aq}) + \text{H}_2\text{O}(\text{l}) + \text{CO}_2(\text{g})$
- B** $\text{Ca}^{2+}(\text{aq}) + \text{CO}_3^{2-}(\text{aq}) + 2\text{H}^+(\text{aq}) \rightarrow \text{Ca}^{2+}(\text{aq}) + \text{H}_2\text{O}(\text{l}) + \text{CO}_2(\text{g})$
- C** $\text{CO}_3^{2-}(\text{aq}) + 2\text{H}^+(\text{aq}) \rightarrow \text{H}_2\text{O}(\text{l}) + \text{CO}_2(\text{g})$
- D** $\text{CaCO}_3(\text{s}) + 2\text{H}^+(\text{aq}) \rightarrow \text{Ca}^{2+}(\text{aq}) + \text{H}_2\text{O}(\text{l}) + \text{CO}_2(\text{g})$

11 What is the relative molecular mass, M_r , of $\text{CuSO}_4 \cdot 5\text{H}_2\text{O}$?

- A** 127
- B** 160
- C** 178
- D** 250

12 1.00 dm^3 of ammonia gas is passed over heated copper(II) oxide.



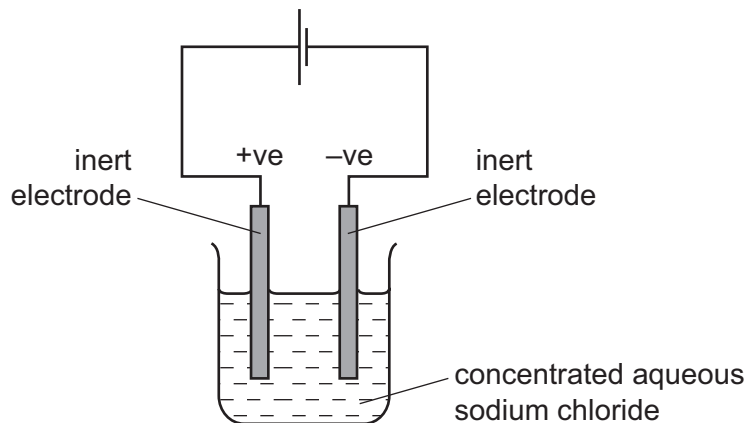
What is the volume of nitrogen formed when measured at the same temperature and pressure as the ammonia?

- A** 0.25 dm^3
- B** 0.50 dm^3
- C** 1.00 dm^3
- D** 2.00 dm^3

- 13 What are the correct anode (positive electrode) and cathode (negative electrode) products when aqueous copper(II) sulfate is electrolysed using copper electrodes?

	anode product	cathode product
A	aqueous copper(II) ions	copper metal
B	aqueous copper(II) ions	hydrogen gas
C	oxygen gas	copper metal
D	oxygen gas	hydrogen gas

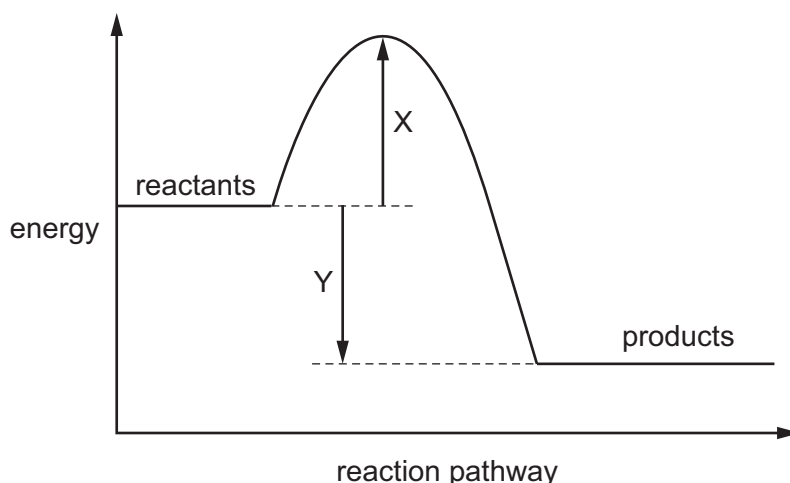
- 14 Concentrated aqueous sodium chloride is electrolysed using inert electrodes.



Which statement about this electrolysis is correct?

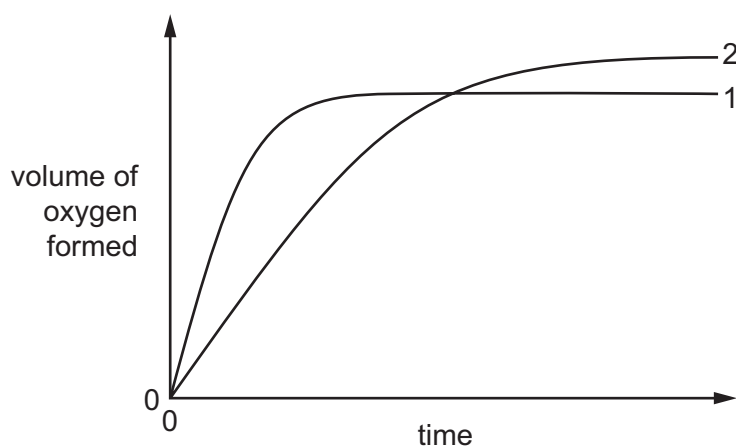

- A** Chloride ions travel through the solution to the negative electrode.
- B** Electrons travel through the solution to the sodium ions.
- C** Gases are given off at both electrodes.
- D** Sodium is formed at the negative electrode.

- 15 The diagram shows the energy profile of a chemical reaction. Two energy changes are labelled X and Y.



Which statement about the reaction is correct?

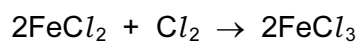
- A The activation energy of the reaction is $X + Y$.
 - B The enthalpy change of the reaction is X .
 - C The enthalpy change of the reaction is $X + Y$.
 - D The reaction is exothermic.
- 16 In the graph, curve 1 was obtained by observing the decomposition of 100 cm^3 of 1.0 mol/dm^3 hydrogen peroxide solution, catalysed by manganese(IV) oxide.



Which alteration to the original experimental conditions would produce curve 2?

- A adding some 0.1 mol/dm^3 hydrogen peroxide solution
- B lowering the temperature
- C using less manganese(IV) oxide
- D using a different catalyst

17 The equation shows a redox reaction between iron(II) chloride and chlorine gas.



Which equation describes the reduction process in this reaction?

- A $2\text{Cl}^- \rightarrow \text{Cl}_2 + 2\text{e}^-$
- B $\text{Cl}_2 + 2\text{e}^- \rightarrow 2\text{Cl}^-$
- C $\text{Fe}^{2+} \rightarrow \text{Fe}^{3+} + \text{e}^-$
- D $\text{Fe}^{3+} + \text{e}^- \rightarrow \text{Fe}^{2+}$

18 Which row correctly describes the oxides?

	Al_2O_3	K_2O	MgO	SO_2
A	basic	acidic	acidic	amphoteric
B	acidic	basic	amphoteric	acidic
C	amphoteric	basic	amphoteric	acidic
D	amphoteric	basic	basic	acidic

19 Which substance is insoluble in water?

- A ammonium carbonate
- B ammonium nitrate
- C calcium carbonate
- D calcium nitrate

20 In which of these equilibria is the forward reaction favoured by an increase in pressure?

- A $2\text{HI}(\text{g}) \rightleftharpoons \text{H}_2(\text{g}) + \text{I}_2(\text{g})$
- B $\text{N}_2\text{O}_4(\text{g}) \rightleftharpoons 2\text{NO}_2(\text{g})$
- C $2\text{NO}(\text{g}) + \text{O}_2(\text{g}) \rightleftharpoons 2\text{NO}_2(\text{g})$
- D $\text{PCl}_5(\text{g}) \rightleftharpoons \text{PCl}_3(\text{g}) + \text{Cl}_2(\text{g})$

- 21 The Contact process, the Haber process and the hydrogenation of fats all involve the use of a catalyst.

Which row correctly describes whether the catalyst used in each process is an element or a compound?

	Contact process	Haber process	hydrogenation of fats
A	compound	compound	compound
B	compound	element	element
C	element	element	compound
D	element	element	element

- 22 Which element is sodium?

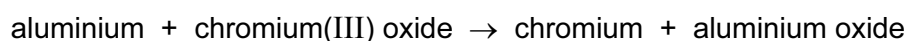
	melting point in °C	electrical conduction	density in g/cm ³
A	1535	good	7.86
B	1083	good	8.92
C	113	poor	2.07
D	98	good	0.97

- 23 A non-metal element forms oxides of the type XO₂ and XO₃.

What is X?

- A** aluminium
- B** carbon
- C** hydrogen
- D** sulfur

- 24 Aluminium reacts with chromium(III) oxide as shown.



Which statements are correct?

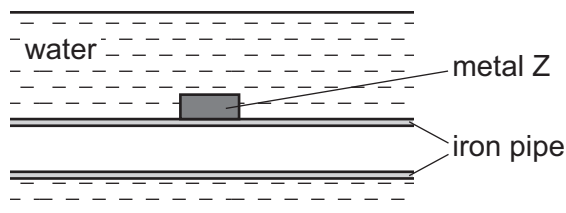
- 1 Aluminium is more reactive than chromium.
- 2 A similar reaction would also take place between aluminium and iron(III) oxide.
- 3 Iron(III) oxide is reduced by another metal in the blast furnace.

- A** 1, 2 and 3 **B** 1 and 2 only **C** 1 and 3 only **D** 2 and 3 only

25 Using the Periodic Table for the relative atomic masses, which has the least mass?

- A 0.1 moles of silicon dioxide, SiO_2
- B 0.5 moles of oxygen, O_2
- C 0.5 moles of lithium, Li
- D 1.0 moles of ammonia, NH_3

26 The diagram shows how an underwater iron pipe can be protected from rusting.



Metal Z can be1..... because it is2..... reactive than iron.

Which words correctly complete gaps 1 and 2?

	1	2
A	copper	less
B	copper	more
C	magnesium	less
D	magnesium	more

27 Brass is an alloy.

Which statement about brass is correct?

- A It contains a sea of electrons.
- B It contains positive and negative ions which are free to move.
- C It is a compound of a metal and a non-metal.
- D It is a compound of two or more metals.

28 Which item is made from mild steel?

- A a car body
- B a container to store gas in a chemical plant
- C a scalpel for use in an operating theatre
- D a set of cutlery

29 The table shows the composition of exhaust gases from an internal combustion engine.

gas	% of the gas in the exhaust fumes
gas Y	71
carbon dioxide	14
water vapour	13
carbon monoxide	1
hydrocarbons	0.3
nitrogen oxides	0.2
sulfur dioxide	less than 0.003

What is gas Y?

- A ammonia
- B argon
- C chlorine
- D nitrogen

30 Which two gases do **not** damage limestone buildings?

- A nitrogen and carbon monoxide
- B nitrogen dioxide and carbon monoxide
- C nitrogen dioxide and carbon dioxide
- D sulfur dioxide and carbon dioxide

31 Iron(III) oxide can be reduced to iron by carbon.

Which other element can reduce iron(III) oxide to iron?

- A copper
- B lead
- C magnesium
- D silver

32 An ammonium salt was added to excess hot aqueous sodium hydroxide. Ammonia gas was evolved. When no more ammonia was evolved, aluminium was added to the solution remaining and more ammonia gas was given off.

What was the ammonium salt?

- A NH_4Cl
- B NH_4NO_3
- C $(\text{NH}_4)_2\text{CO}_3$
- D $(\text{NH}_4)_2\text{SO}_4$

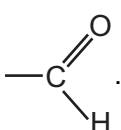
33 Two esters have the same molecular formula, $C_3H_6O_2$.

What are the names of these two esters?

- 1 methyl ethanoate
- 2 ethyl propanoate
- 3 ethyl methanoate
- 4 propyl methanoate

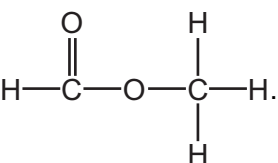
A 1 and 2 B 1 and 3 C 2 and 4 D 3 and 4

34 Which statement is correct?

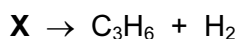
A Carboxylic acids contain the functional group .

B Ethanoic acid will react and fizz when copper is added.

C Ethanol will decolourise acidified potassium manganate(VII).

D The structure of ethyl ethanoate is .

35 When cracked, one mole of a compound, **X**, produces one mole of propene and one mole of hydrogen.



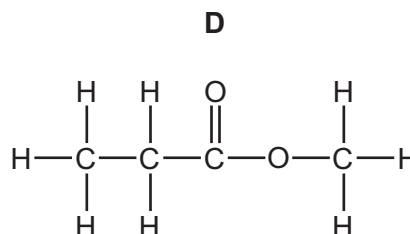
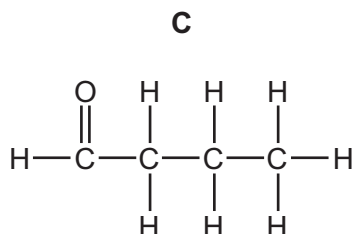
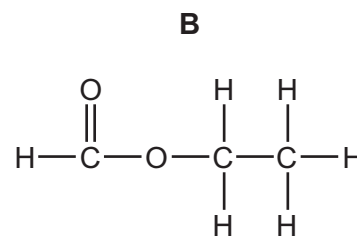
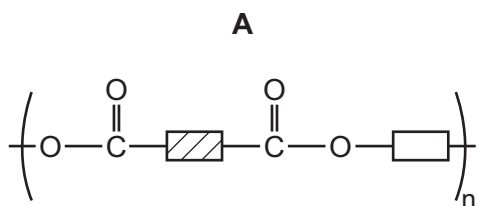
What type of compound is **X**?

- A an alcohol
- B an alkane
- C an alkene
- D a carboxylic acid

36 Which is a correct definition of isomers?

- A atoms with the same relative atomic mass and different structures
- B compounds with the same molecular formula and different structures
- C compounds with the same molecular mass and different structures
- D elements with the same molecular mass and the same structures

37 Which of the following has **not** been prepared by reacting a carboxylic acid with an alcohol?



38 Which of these polymers is a protein?

- A** $(C_2H_3Cl)_n$ **B** $(C_5H_8O_2)_n$ **C** $(C_6H_{10}O_5)_n$ **D** $(C_2H_3NO)_n$

39 In the addition polymer poly(propene), what is the simplest ratio of carbon atoms to hydrogen atoms?

	carbon atoms	hydrogen atoms
A	1	2
B	2	1
C	2	4
D	3	6

40 Which statement about vegetable oil and the margarine made from it is correct?

- A** Both are liquids at room temperature.
B Both occur naturally.
C Margarine has the higher melting point.
D Vegetable oil has fewer carbon-carbon double bonds than margarine.

DATA SHEET
The Periodic Table of the Elements

		Group																																																																																																																																																																																																																																																																																																																																																																																																																																																																																																																																												
		I	II	III	IV	V	VI	VII	VIII	IX	X																																																																																																																																																																																																																																																																																																																																																																																																																																																																																																																																			
		1 H Hydrogen 1																																																																																																																																																																																																																																																																																																																																																																																																																																																																																																																																												
		4 He Helium 2																																																																																																																																																																																																																																																																																																																																																																																																																																																																																																																																												
7	9	3	4																																																																																																																																																																																																																																																																																																																																																																																																																																																																																																																																											
Li Lithium	Be Beryllium																																																																																																																																																																																																																																																																																																																																																																																																																																																																																																																																													
23	24																																																																																																																																																																																																																																																																																																																																																																																																																																																																																																																																													
Na Sodium	Mg Magnesium																																																																																																																																																																																																																																																																																																																																																																																																																																																																																																																																													
39	40	19	20	21	22	23	24	25	26	27	28	29	30	31	32	33	34	35	36																																																																																																																																																																																																																																																																																																																																																																																																																																																																																																																											
K Potassium	Ca Calcium	Sc Scandium	Ti Titanium	V Vanadium	Cr Chromium	Mn Manganese	Fe Iron	Co Cobalt	Ni Nickel	Cu Copper	Zn Zinc	Ga Gallium	Ge Germanium	As Arsenic	Se Selenium	Br Bromine	Kr Krypton																																																																																																																																																																																																																																																																																																																																																																																																																																																																																																																													
85	88	37	40	41	42	43	44	45	46	47	48	49	50	51	52	53	54																																																																																																																																																																																																																																																																																																																																																																																																																																																																																																																													
Rb Rubidium	Sr Strontium	Y Yttrium	Zr Zirconium	Nb Niobium	Mo Molybdenum	Tc Technetium	Ru Ruthenium	Rh Rhodium	Pd Palladium	Ag Silver	Cd Cadmium	In Indium	Sn Tin	Sb Antimony	Te Tellurium	I Iodine	Xe Xenon																																																																																																																																																																																																																																																																																																																																																																																																																																																																																																																													
133	137	55	56	57	72	73	74	75	76	77	78	79	80	81	82	83	84	85	86																																																																																																																																																																																																																																																																																																																																																																																																																																																																																																																											
Cs Caesium	Ba Barium	La Lanthanum	Hf Hafnium	Ta Tantalum	W Tungsten	Re Rhenium	Os Osmium	Ir Iridium	Pt Platinum	Au Gold	Hg Mercury	Tl Thallium	Pb Lead	Bi Bismuth	Po Polonium	At Astatine	Rn Radon																																																																																																																																																																																																																																																																																																																																																																																																																																																																																																																													
226	227	87	88	89	†																																																																																																																																																																																																																																																																																																																																																																																																																																																																																																																																									
Fr Francium	Ra Radium	Ac Actinium																																																																																																																																																																																																																																																																																																																																																																																																																																																																																																																																												
		*58-71 Lanthanoid series †90-103 Actinoid series																																																																																																																																																																																																																																																																																																																																																																																																																																																																																																																																												
140	141	58	59	60	61	62	63	64	65	66	67	68	69	70	71	72	73	74	75	76	77	78	79	80	81	82	83	84	85	86																																																																																																																																																																																																																																																																																																																																																																																																																																																																																																																
Ce Cerium	Pr Praseodymium	Nd Neodymium	Pm Promethium	Sm Samarium	Eu Europium	Gd Gadolinium	Tb Terbium	Dy Dysprosium	Ho Holmium	Er Erbium	Tm Thulium	Yb Ytterbium	Lu Lutetium	La Lanthanum	Ce Cerium	Pr Praseodymium	Nd Neodymium	Pm Promethium	Sm Samarium	Eu Europium	Gd Gadolinium	Tb Terbium	Dy Dysprosium	Ho Holmium	Er Erbium	Tm Thulium	Yb Ytterbium	Lu Lutetium	La Lanthanum	Ce Cerium	Pr Praseodymium	Nd Neodymium	Pm Promethium	Sm Samarium	Eu Europium	Gd Gadolinium	Tb Terbium	Dy Dysprosium	Ho Holmium	Er Erbium	Tm Thulium	Yb Ytterbium	Lu Lutetium																																																																																																																																																																																																																																																																																																																																																																																																																																																																																																			
232	91	92	93	94	95	96	97	98	99	100	101	102	103	104	105	106	107	108	109	110	111	112	113	114	115	116	117	118	119	120	121	122	123	124	125	126	127	128	129	130	131	132	133	134	135	136	137	138	139	140	141	142	143	144	145	146	147	148	149	150	151	152	153	154	155	156	157	158	159	160	161	162	163	164	165	166	167	168	169	170	171	172	173	174	175	176	177	178	179	180	181	182	183	184	185	186	187	188	189	190	191	192	193	194	195	196	197	198	199	200	201	202	203	204	205	206	207	208	209	210	211	212	213	214	215	216	217	218	219	220	221	222	223	224	225	226	227	228	229	230	231	232	233	234	235	236	237	238	239	240	241	242	243	244	245	246	247	248	249	250	251	252	253	254	255	256	257	258	259	260	261	262	263	264	265	266	267	268	269	270	271	272	273	274	275	276	277	278	279	280	281	282	283	284	285	286	287	288	289	290	291	292	293	294	295	296	297	298	299	300	301	302	303	304	305	306	307	308	309	310	311	312	313	314	315	316	317	318	319	320	321	322	323	324	325	326	327	328	329	330	331	332	333	334	335	336	337	338	339	340	341	342	343	344	345	346	347	348	349	350	351	352	353	354	355	356	357	358	359	360	361	362	363	364	365	366	367	368	369	370	371	372	373	374	375	376	377	378	379	380	381	382	383	384	385	386	387	388	389	390	391	392	393	394	395	396	397	398	399	400	401	402	403	404	405	406	407	408	409	410	411	412	413	414	415	416	417	418	419	420	421	422	423	424	425	426	427	428	429	430	431	432	433	434	435	436	437	438	439	440	441	442	443	444	445	446	447	448	449	450	451	452	453	454	455	456	457	458	459	460	461	462	463	464	465	466	467	468	469	470	471	472	473	474	475	476	477	478	479	480	481	482	483	484	485	486	487	488	489	490	491	492	493	494	495	496	497	498	499	500	501	502	503	504	505	506	507	508	509	510	511	512	513	514	515	516	517	518	519	520	521	522	523	524	525	526	527	528	529	530	531	532	533	534	535	536	537	538	539	540	541	542	543	544	545	546	547	548	549	550	551	552	553	554	555	556	557	558	559	560	561	562	563	564	565	566	567	568	569	570	571	572	573	574	575	576	577	578	579	580	581	582	583	584	585	586	587	588	589	590	591	592	593	594	595	596	597	598	599	600	601	602	603	604	605	606	607	608	609	610	611	612	613	614	615	616