



UNIVERSITY OF CAMBRIDGE INTERNATIONAL EXAMINATIONS
General Certificate of Education Ordinary Level

CANDIDATE
NAME

CENTRE
NUMBER

--	--	--	--	--

CANDIDATE
NUMBER

--	--	--	--



CHEMISTRY

5070/02

Paper 2 Theory

October/November 2007

1 hour 30 minutes

Candidates answer on the Question Paper.

Additional Materials: Answer Booklet/Paper

READ THESE INSTRUCTIONS FIRST

Write your Centre number, candidate number and name on all the work you hand in.

Write in dark blue or black pen.

Do not use staples, paper clips, highlighters, glue or correction fluid.

DO **NOT** WRITE IN ANY BARCODES.

Section A

Answer **all** questions.

Write your answers in the spaces provided on the Question Paper.

Section B

Answer any **three** questions.

Write your answers on any lined pages and/or separate answer paper.

A copy of the Periodic Table is printed on page 20.

At the end of the examination, fasten all your work securely together.

The number of marks is given in brackets [] at the end of each question or part question.

For Examiner's Use	
Section A	
B7	
B8	
B9	
B10	
Total	

This document consists of **19** printed pages and **1** blank page.



Section A

Answer **all** the questions in this section in the spaces provided.

The total mark for this section is 45.

A1 Choose from the following gases to answer the questions below.

ammonia
butane
carbon dioxide
carbon monoxide
hydrogen
methane
nitrogen
nitrogen dioxide
oxygen

Each gas can be used once, more than once or not at all.

Which gas is

(a) the main constituent of natural gas,

.....[1]

(b) used by plants in photosynthesis to form glucose,

.....[1]

(c) produced when aqueous sodium nitrate is warmed with aqueous sodium hydroxide and aluminium foil,

.....[1]

(d) a product of the incomplete combustion of hydrocarbons,

.....[1]

(e) produced by the Haber process,

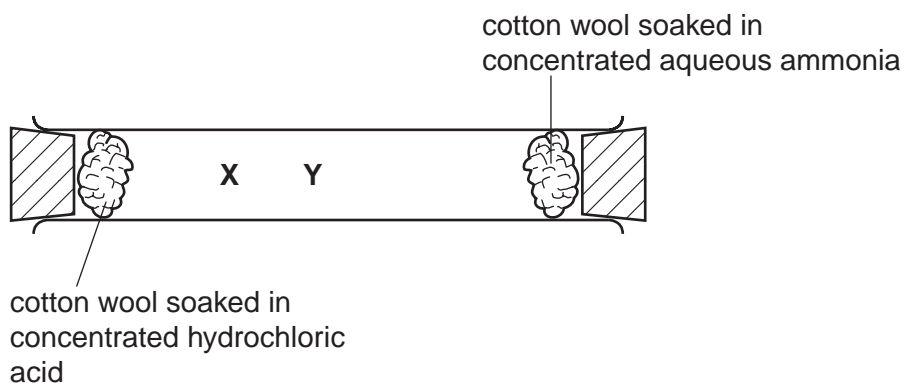
.....[1]

(f) formed at the cathode when an aqueous solution of sulphuric acid is electrolysed?

.....[1]

[Total: 6]

A2 A student set up the apparatus shown below.



Colourless fumes of hydrogen chloride are given off by the hydrochloric acid.
Colourless fumes of ammonia are given off by the aqueous ammonia.

- (a)** After a few seconds, white fumes were seen at point **X** in the tube.
Name the compound formed at point **X**.

.....[1]

- (b)** Use the kinetic particle theory to explain this observation.

.....

[3]

- (c)** The student repeated the experiment using a solution of methylamine, CH_3NH_2 , in place of ammonia, NH_3 .
The white fumes were seen at point **Y** in the tube, rather than at point **X**.
Explain this difference.

.....
[2]

[Total: 6]

A3 Germanium, Ge, is an element in Group IV of the Periodic Table. Some of its chemistry resembles that of carbon.

(a) How many electrons does an atom of germanium have in its outer shell?

.....[1]

(b) Germanium forms a range of saturated compounds with hydrogen. These compounds resemble the alkanes.

(i) Predict the general molecular formula for these compounds.

.....[1]

(ii) Germanoethane, Ge_2H_6 , has a similar structure to ethane.
Draw the full structural formula for germanoethane.

[1]

(iii) Hydrochloric acid reacts with magnesium germanide, Mg_2Ge , to form germanomethane, GeH_4 , and magnesium chloride.
Write an equation for this reaction.

[1]

(c) Germanium(IV) oxide, GeO_2 , is an amphoteric oxide.
What do you understand by the term *amphoteric*?

.....[1]

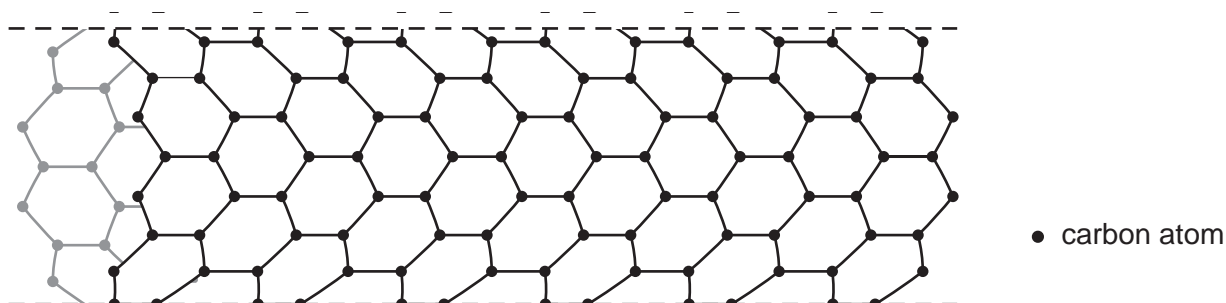
(d) An aqueous solution of germanium(II) chloride reduces iron(III) ions to iron(II) ions.
Describe a test for iron(II) ions and give the result.

test

result[2]

[Total: 7]

A4 In recent years scientists have made tube-shaped structures of carbon called nanotubes.



(a) State **two** differences between the structure of a carbon nanotube and the structure of diamond.

.....

[2]

(b) Carbon nanotubes are fifty times stronger than steel.
 Use ideas about structure and bonding to suggest why these nanotubes are so strong.

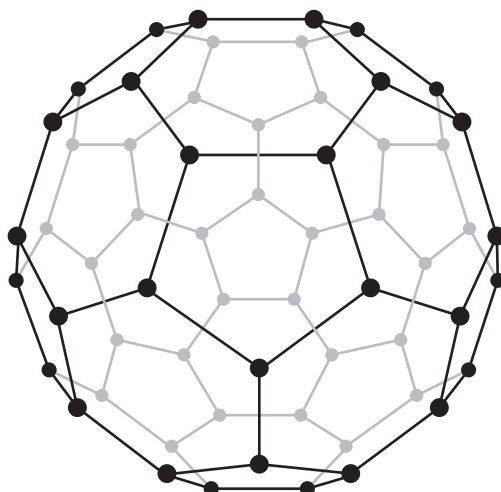
.....
[1]

(c) Carbon nanotubes are good electrical conductors.

(i) State the name of another form of carbon which can conduct electricity.
[1]

(ii) Carbon nanotubes conduct electricity nearly as well as copper.
 Explain why copper is a good conductor of electricity.
[1]

- (d) Another form of carbon is buckminsterfullerene.



● carbon atom

Argon can be trapped inside the cage-like structure of buckminsterfullerene.

- (i) Explain why argon is unreactive.

.....[1]

- (ii) One isotope of argon is ${}_{18}^{38}\text{Ar}$.

Calculate the number of neutrons in this isotope of argon.

.....[1]

- (e) Recently, chemists have been trying to attach atoms of transition elements to buckminsterfullerene to make more efficient catalysts.
State **two** properties, other than catalysis, which distinguish transition elements from other metals.

.....

.....[2]

[Total: 9]

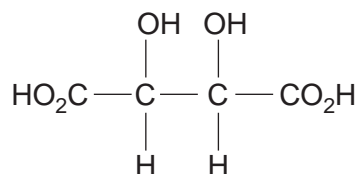
A5 Red grapes contain a number of coloured pigments. Some red grapes are crushed and the pigments extracted with a solvent. The deep red solution contains a mixture of pigments.

- (a)** Name the technique used to separate the pigments in this mixture and draw a labelled diagram of the apparatus you would use.

name of technique

[3]

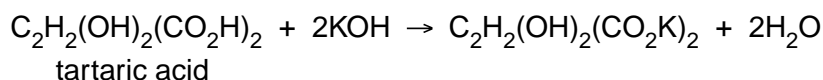
- (b) Tartaric acid can also be extracted from grape juice.
The structure of tartaric acid is shown below.



- (i) Deduce the empirical formula of tartaric acid.

.....[1]

- (ii) A solution of tartaric acid was titrated with 0.100 mol/dm³ potassium hydroxide.



It required 6.00 cm³ of the potassium hydroxide solution to neutralise 20.0 cm³ of tartaric acid. Calculate the concentration, in mol/dm³, of the tartaric acid solution.

.....mol/dm³ [3]

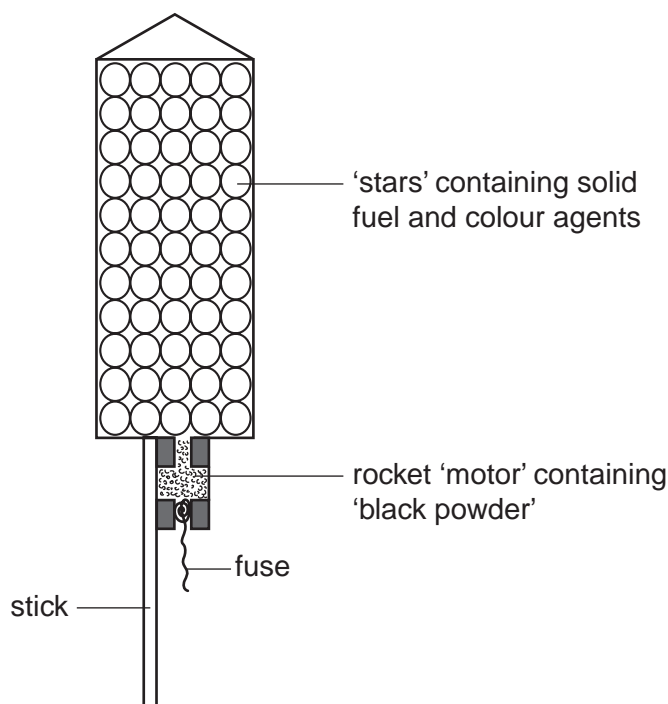
- (iii) Tartaric acid is purified by recrystallisation.

On analysis, 8.00 g of impure tartaric acid was found to contain 7.40 g of pure tartaric acid. Calculate the percentage purity of the impure tartaric acid.

.....% [1]

[Total: 8]

A6 The diagram shows the inside of a firework rocket.



- (a)** Black powder is a mixture of charcoal, potassium nitrate and sulphur. When black powder is ignited, the potassium nitrate decomposes to form potassium nitrite, KNO_2 , and oxygen. Write the equation for the decomposition of potassium nitrate.

.....[1]

- (b)** The oxygen liberated by the potassium nitrate oxidises the sulphur to sulphur dioxide. State one harmful effect of sulphur dioxide on the environment.

.....[1]

- (c)** The gases produced by the burning charcoal and sulphur cause the rocket to move upwards. Explain why the charcoal and sulphur in the rocket 'motor' are present as small grains rather than as large lumps.

.....
.....[2]

- (d)** Sodium sulphate is often used in fireworks to give yellow sparks. Describe a test for sulphate ions and give the result.

test

result[2]

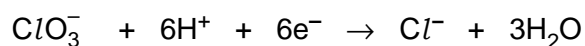
(e) Potassium chlorate(V), $KClO_3$, is often used in fireworks to produce flash and noise effects.

(i) An aqueous solution of potassium chlorate(V) is a good oxidising agent. Describe a chemical test for an oxidising agent and state the result.

test

result[2]

(ii) When potassium chlorate(V) reacts as an oxidising agent, the chlorate(V) ions are reduced to chloride ions.



How does this equation show that the chlorate(V) ion gets reduced?

.....

.....[1]

[Total: 9]

Section B

Answer **three** questions from this section.

The total mark for this section is 30.

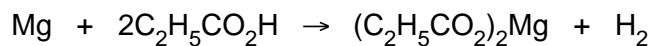
B7 The exhaust from an internal combustion engine contains the pollutant gases carbon monoxide and nitrogen dioxide.

- (a) Many vehicles have a catalytic converter fitted on their exhaust systems. Describe the chemical reactions which occur in the catalytic converter to reduce the emissions of carbon monoxide and nitrogen dioxide. [3]
- (b) Unburnt hydrocarbons such as heptane, C_7H_{16} , are oxidised in the catalytic converter. Write an equation for the complete combustion of heptane. [1]
- (c) Carbon monoxide reacts with nickel to form a compound containing nickel, carbon and oxygen only. Analysis of 5.70 g of this compound showed that it contained 1.97 g nickel, 1.60 g carbon and 2.13 g oxygen. Determine the empirical formula of this compound. [3]
- (d) Nickel is used in the manufacture of margarine to catalyse the reduction of unsaturated vegetable oils to saturated oils.
- (i) What do you understand by the following terms?
- catalyst
 - unsaturated
- [2]
- (ii) What other reactant is needed to convert an unsaturated oil into a saturated oil? [1]

[Total: 10]

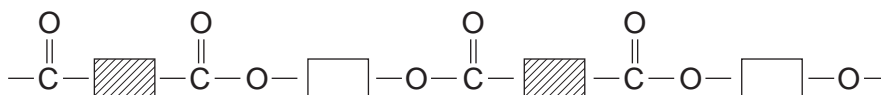
B8 Propanoic acid, $C_2H_5CO_2H$, is a weak acid.

- (a) Explain what is meant by the term *weak acid*. [1]
- (b) Propanoic acid reacts with sodium carbonate. Write the equation for this reaction. [1]
- (c) Magnesium reacts with propanoic acid to form magnesium propanoate and hydrogen.



A student added 4.80 g of magnesium to 30.0 g of propanoic acid.

- (i) Which one of these reactants, magnesium or propanoic acid, is in excess? Explain your answer. [2]
- (ii) Calculate both the number of moles of hydrogen and the volume of hydrogen formed at r.t.p. [2]
- (d) *Terylene* has the simplified structure shown.

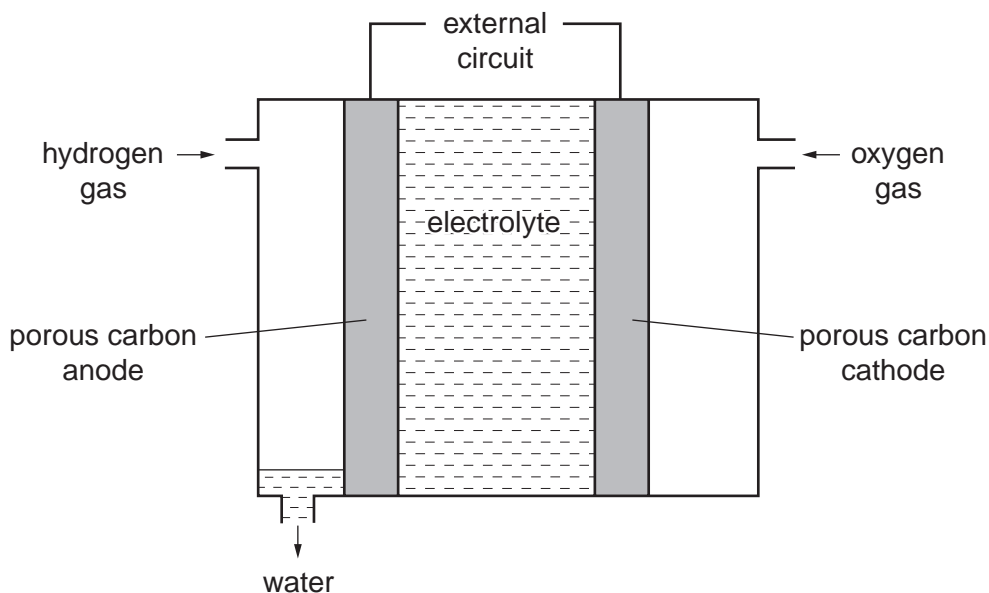


- (i) State the functional groups on the monomers used to make *Terylene*. [1]
- (ii) State the type of polymerisation that occurs when *Terylene* is made. [1]
- (iii) State one large scale use of *Terylene*. [1]
- (e) Many problems are caused by the disposal of plastics. Describe one method of disposal of a plastic and a problem caused by this method. [1]

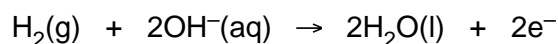
[Total: 10]

B9 One of the first buses to use hydrogen as a fuel was operated in Erlangen, Germany, in 1996. The hydrogen was stored in thick pressurised tanks on the roof of the bus.

- (a) Describe **two** advantages of using hydrogen as a fuel rather than petrol. [2]
- (b) Suggest one disadvantage of using hydrogen as a fuel. [1]
- (c) Some buses use hydrogen to generate electrical energy from a fuel cell. The structure of a typical fuel cell is shown.



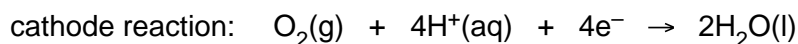
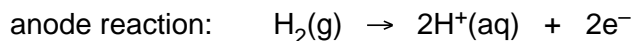
- (i) The equation for the reaction at the anode is shown.



What type of reaction is this? Explain your answer. [1]

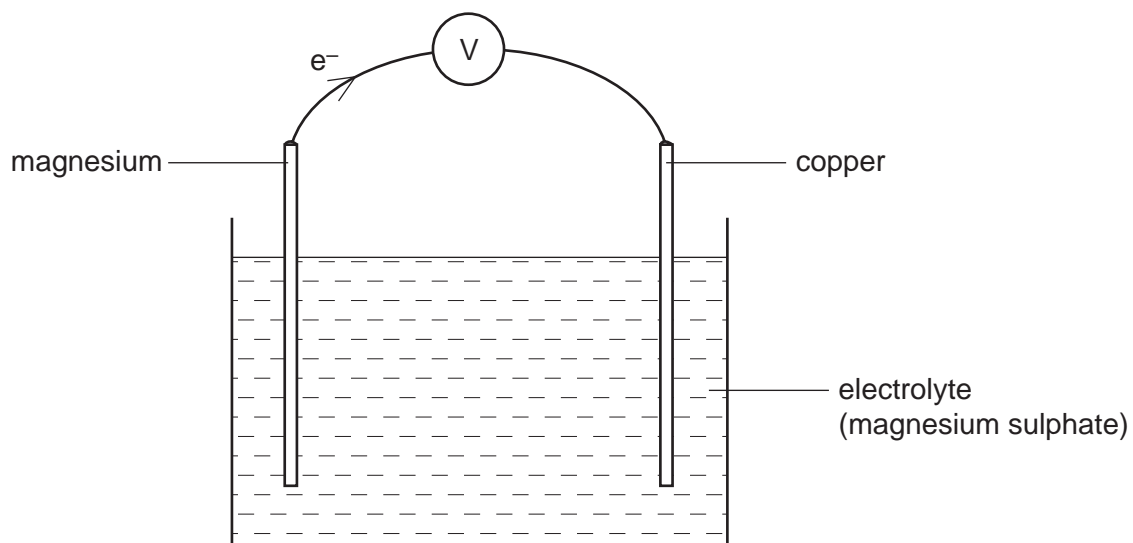
- (ii) At the cathode oxygen reacts with water to form hydroxide ions. Write an ionic equation for this reaction. [1]

- (d) In some fuel cells an acidic electrolyte is used.



- (i) Write an overall equation for the reaction occurring in this fuel cell. [1]
- (ii) Suggest a suitable electrolyte for this fuel cell. [1]

- (e) An electric current can also be generated by a simple electrochemical cell such as the one shown.

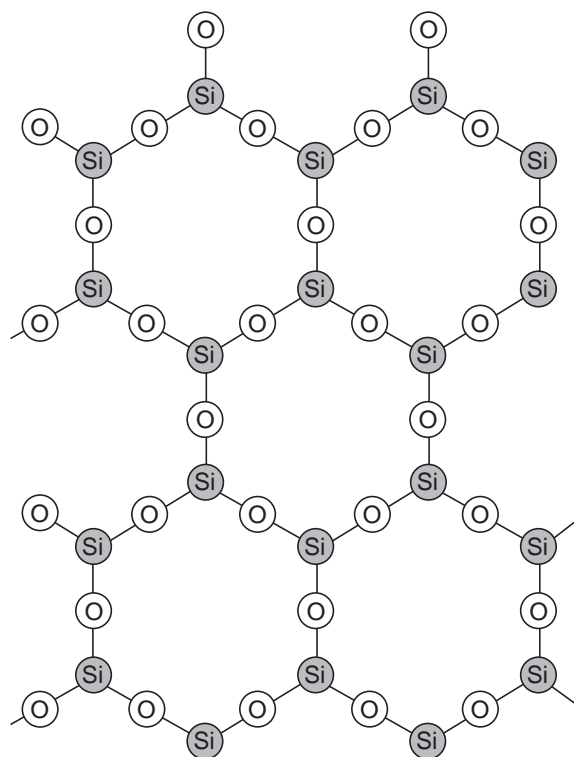


- (i) Explain why the flow of electrons is in the direction shown in the diagram. [2]
- (ii) Suggest why silver nitrate would not be a good electrolyte to use in this cell. [1]

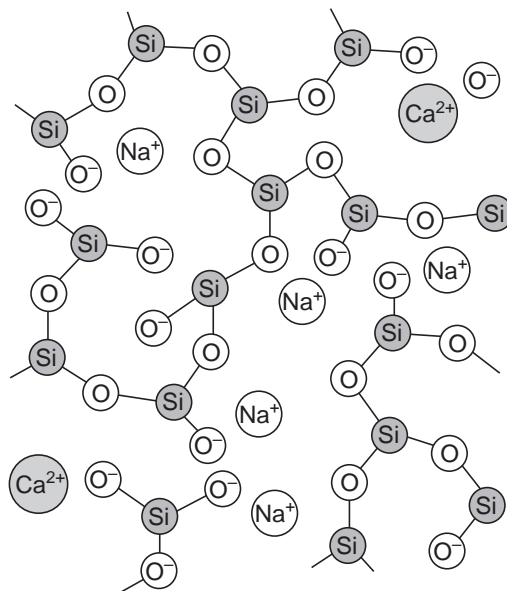
[Total: 10]

B10 Soda-lime glass is made by heating a mixture of calcium carbonate, sodium carbonate and sand in a furnace to a high temperature.

Other glasses contain compounds called silicates. The simplified structures of a silicate and soda-lime glass are shown.



silicate



soda-lime glass

- (a) Describe two differences between the silicate and the soda-lime glass. [2]
- (b) When soda-lime glass is melted, it conducts electricity. Use the information in the diagram to explain this fact. [1]
- (c) Calcium carbonate decomposes in the furnace. Write an equation for the thermal decomposition of calcium carbonate. Include state symbols. [1]
- (d) Some types of glass contain lead ions, Pb^{2+} . Dishwasher powders are highly alkaline.
- (i) Which ion is responsible for alkalinity? [1]
- (ii) When glasses containing lead ions are washed repeatedly in a dishwasher they go slightly white in colour. Suggest a chemical explanation for why the glass goes white. Write an equation for the reaction which occurs. [2]
- (e) Calcium carbonate reacts with hydrochloric acid. Describe how you would investigate the rate of reaction of calcium carbonate with hydrochloric acid. Give a brief description of the apparatus you would use and the measurements you would make. [3]

[Total: 10]

DATA SHEET
The Periodic Table of the Elements

		Group																	
		I	II	III	IV	V	VI	VII	0										
		<table border="1" style="width: 100%; border-collapse: collapse; text-align: center;"> <tr> <td style="width: 10%;">1</td> <td style="width: 10%;">H</td> <td style="width: 10%;">Hydrogen</td> <td style="width: 10%;">1</td> </tr> </table>										1	H	Hydrogen	1				
1	H	Hydrogen	1																
7	Li	9	Be	11	B	12	C	13	Al	14	Si	15	P	16	S	17	Cl	18	Ar
	Lithium		Beryllium		Boron		Carbon		Aluminium		Silicon		Phosphorus		Sulphur		Chlorine		Argon
23	Na	24	Mg	25	Mn	26	Fe	27	Co	28	Ni	29	Cu	30	Zn	31	Ga	32	Ge
	Sodium		Magnesium		Manganese		Iron		Cobalt		Nickel		Copper		Zinc		Gallium		Germanium
39	K	40	Ca	41	Nb	42	Mo	43	Tc	44	Ru	45	Rh	46	Pd	47	Ag	48	Cd
	Potassium		Calcium		Niobium		Molybdenum		Technetium		Ruthenium		Rhodium		Palladium		Silver		Cadmium
85	Rb	86	Sr	87	Y	88	Zr	89	Y	90	Hf	91	Ta	92	W	93	Re	94	Os
	Rubidium		Strontium		Yttrium		Zirconium		Zirconium		Rhenium		Tungsten		Rhenium		Osmium		Iridium
133	Cs	137	Ba	138	La	139	Hf	140	Re	141	Os	142	Ir	143	Pt	144	Au	145	Hg
	Caesium		Barium		Lanthanum		Hafnium		Rhenium		Osmium		Iridium		Platinum		Gold		Mercury
55	Fr	87	Ra	88	Ac	89	Fr	87	Ac	89	Fr	87	Ac	89	Fr	87	Ac	89	Fr
	Francium		Radium		Actinium		Francium		Actinium		Francium		Actinium		Francium		Actinium		Francium

*58-71 Lanthanoid series
†90-103 Actinoid series

a	X	relative atomic mass
b	X	atomic symbol
		proton (atomic) number

The volume of one mole of any gas is 24 dm³ at room temperature and pressure (r.t.p.).