



Cambridge IGCSE™


CANDIDATE
NAME

CENTRE
NUMBER

--	--	--	--	--

CANDIDATE
NUMBER

--	--	--	--



PHYSICAL EDUCATION

0413/12

Paper 1 Theory

May/June 2021

1 hour 45 minutes

You must answer on the question paper.

No additional materials are needed.

INSTRUCTIONS

- Answer **all** questions.
- Use a black or dark blue pen. You may use an HB pencil for any diagrams or graphs.
- Write your name, centre number and candidate number in the boxes at the top of the page.
- Write your answer to each question in the space provided.
- Do **not** use an erasable pen or correction fluid.
- Do **not** write on any bar codes.
- You may use a calculator.
- You should show all your working and use appropriate units.

INFORMATION

- The total mark for this paper is 100.
- The number of marks for each question or part question is shown in brackets [].

This document has **16** pages. Any blank pages are indicated.

1 Identify **two** types of blood vessels.

1

2

[2]

2 Speed is a component of fitness.

(a) (i) Define *speed*.

.....

..... [1]

(ii) Describe how to carry out a named fitness test for speed.

name of test

description

.....

.....

.....

.....

.....

.....

.....

.....

[4]

(b) Describe **two** reasons, apart from monitoring improvement, why a coach would carry out fitness tests on a performer.

1

.....

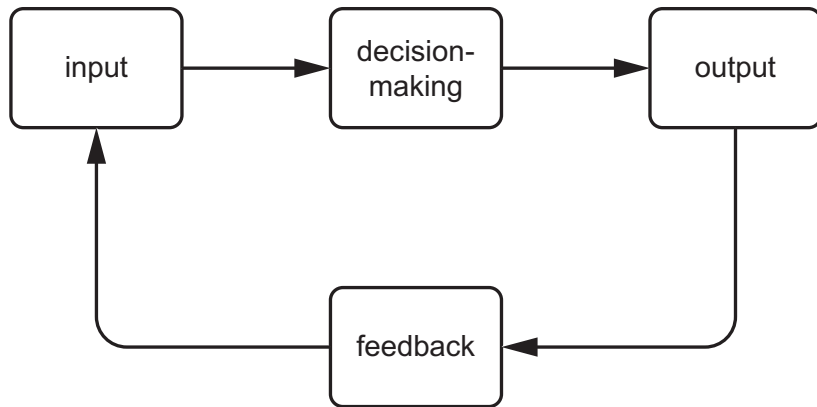
2

.....

[2]

[Total: 7]

3 The diagram shows a basic information processing model.



(a) Explain the role of each stage of the information processing model when performing a named skill in a physical activity.

skill

input

.....

decision-making

.....

output

.....

feedback

.....

[4]

(b) Describe, using an example of a named skill, how the concept of limited channel capacity can affect a performance.

skill

description

.....

.....

.....

[2]

[Total: 6]

4 Diagrams **A**, **B** and **C** show a weight-training exercise being carried out.



A

B

C

(a) Identify and describe the following:

the type of isotonic muscle contraction from **A** to **B**

description

the type of isotonic muscle contraction from **B** to **C**

description

[4]

(b) The diagram shows a performer in a sitting position against a wall.



(i) State the type of muscle contraction taking place in the quadriceps to remain in this position. Describe this type of muscle contraction.

type of muscle contraction

description

.....

[2]

(ii) Describe **two** other examples from different physical activities of when this type of muscle contraction is used.

physical activity 1

example 1

.....

physical activity 2

example 2

.....

[2]

[Total: 8]

5 Describe advantages that media coverage provides for audiences/spectators.

.....
.....
.....
.....
.....
..... [3]

6 (a) Define VO_2 max.


.....
..... [1]

(b) Explain how **three** named factors can affect a performer's VO_2 max.

factor 1
explanation
.....
factor 2
explanation
.....
factor 3
explanation
..... [6]

[Total: 7]

7 The diagrams show a jump shot in basketball.



(a) Identify the main muscle fibre type used in the legs from diagram **A** to diagram **B** to enable the performer to gain maximum height in the jump. Describe **two** characteristics of this type of muscle fibre.

main muscle fibre type

characteristic 1

.....

characteristic 2

.....

[3]

(b) (i) Identify the type of movement taking place at the shoulder from diagram **A** to diagram **B**. Identify the main agonist muscle.

type of movement

main agonist muscle

[2]

(ii) Identify the type of movement taking place at the elbow from diagram **A** to diagram **B**.

..... [1]

(iii) Describe the action of a named agonist and a named antagonist in the movement taking place at the elbow from diagram **A** to diagram **B**.

agonist

action

antagonist

action

[4]

[Total: 10]

8 (a) Explain, using practical examples from a named physical activity, how a named theory links the level of arousal with the quality of performance.

physical activity

name of theory

explanation

.....

.....

.....

.....

.....

[4]

(b) Suggest **two** different causes of anxiety for a sprinter waiting to start an Olympic final.

1

.....

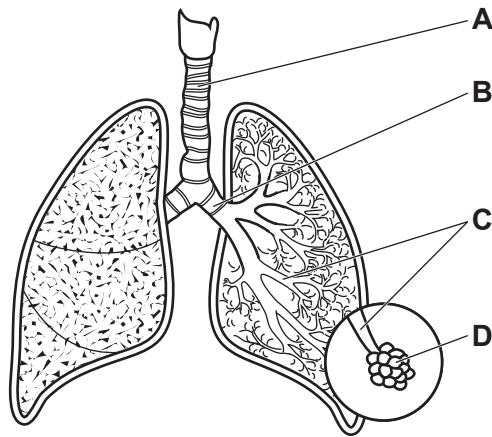
2

.....

[2]

[Total: 6]

9 (a) The diagram shows part of the pathway of air into the body.



(i) Identify the structures labelled **A**, **B** and **C**.

A

B

C

[3]

(ii) Describe **one** function and **two** characteristics of structure **D**.

function

.....

characteristic 1

.....

characteristic 2

.....

[3]

11 Before physical activity performers may warm up and use relaxation techniques.

(a) State **two** phases of a warm up and explain a different physiological benefit of each phase for a performer.

phase 1

benefit

.....

phase 2

benefit

.....

[4]

(b) State **two** relaxation techniques that a performer might use before a physical activity.

1

.....

2

.....

[2]

(c) After exercise performers will need to recover.

Describe how Excess Post-exercise Oxygen Consumption (EPOC) aids recovery after a period of anaerobic exercise.

.....

.....

.....

.....

.....

.....

[3]

[Total: 9]

12 Explain, using named physical activities, different ways performance may be improved from using each of the following types of prohibited performance-enhancing drug.

anabolic steroids

physical activity

explanation

.....

diuretics

physical activity

explanation

.....

beta blockers

physical activity

explanation

.....

[3]

13 Describe a function of each of the following components of blood:

white blood cells

.....

plasma.

.....

[2]

14 There are three stages of learning.

(a) Identify each of the **three** stages of learning. Describe, using examples from a named physical activity, a characteristic of a performer at each stage of learning.

physical activity

stage 1

characteristic

.....

stage 2

characteristic

.....

stage 3

characteristic

.....

[6]

(b) Describe, using examples from a named physical activity, how the following types of guidance can be used:

physical activity

visual

.....

mechanical.

.....

[2]

[Total: 8]

15 Describe, from a named physical activity, an open skill and a closed skill. Justify each of your answers.

physical activity

open skill

justification

.....

closed skill

justification

.....

[4]

16 Weight training is a method of training.

(a) Describe **two** advantages and **two** disadvantages of using this method of training.

advantages

1

.....

2

.....

disadvantages

1

.....

2

.....

[4]

(b) Describe how **two** named principles of overload can be applied to a weight training programme.

principle 1

application

.....

principle 2

application

.....

[4]

[Total: 8]

BLANK PAGE

Permission to reproduce items where third-party owned material protected by copyright is included has been sought and cleared where possible. Every reasonable effort has been made by the publisher (UCLES) to trace copyright holders, but if any items requiring clearance have unwittingly been included, the publisher will be pleased to make amends at the earliest possible opportunity.

To avoid the issue of disclosure of answer-related information to candidates, all copyright acknowledgements are reproduced online in the Cambridge Assessment International Education Copyright Acknowledgements Booklet. This is produced for each series of examinations and is freely available to download at www.cambridgeinternational.org after the live examination series.

Cambridge Assessment International Education is part of the Cambridge Assessment Group. Cambridge Assessment is the brand name of the University of Cambridge Local Examinations Syndicate (UCLES), which itself is a department of the University of Cambridge.