



Cambridge IGCSE™

CANDIDATE
NAME


--

CENTRE
NUMBER

--	--	--	--	--

CANDIDATE
NUMBER

--	--	--	--



ADDITIONAL MATHEMATICS

0606/13

Paper 1

May/June 2020

2 hours

You must answer on the question paper.

No additional materials are needed.

INSTRUCTIONS

- Answer **all** questions.
- Use a black or dark blue pen. You may use an HB pencil for any diagrams or graphs.
- Write your name, centre number and candidate number in the boxes at the top of the page.
- Write your answer to each question in the space provided.
- Do **not** use an erasable pen or correction fluid.
- Do **not** write on any bar codes.
- You should use a calculator where appropriate.
- You must show all necessary working clearly; no marks will be given for unsupported answers from a calculator.
- Give non-exact numerical answers correct to 3 significant figures, or 1 decimal place for angles in degrees, unless a different level of accuracy is specified in the question.

INFORMATION

- The total mark for this paper is 80.
- The number of marks for each question or part question is shown in brackets [].

This document has **16** pages. Blank pages are indicated.

Mathematical Formulae**1. ALGEBRA***Quadratic Equation*

For the equation $ax^2 + bx + c = 0$,

$$x = \frac{-b \pm \sqrt{b^2 - 4ac}}{2a}$$

Binomial Theorem

$$(a + b)^n = a^n + \binom{n}{1}a^{n-1}b + \binom{n}{2}a^{n-2}b^2 + \dots + \binom{n}{r}a^{n-r}b^r + \dots + b^n$$

where n is a positive integer and $\binom{n}{r} = \frac{n!}{(n-r)!r!}$

Arithmetic series

$$u_n = a + (n-1)d$$

$$S_n = \frac{1}{2}n(a + l) = \frac{1}{2}n\{2a + (n-1)d\}$$

Geometric series

$$u_n = ar^{n-1}$$

$$S_n = \frac{a(1-r^n)}{1-r} \quad (r \neq 1)$$

$$S_\infty = \frac{a}{1-r} \quad (|r| < 1)$$

2. TRIGONOMETRY*Identities*

$$\begin{aligned} \sin^2 A + \cos^2 A &= 1 \\ \sec^2 A &= 1 + \tan^2 A \\ \operatorname{cosec}^2 A &= 1 + \cot^2 A \end{aligned}$$

Formulae for $\triangle ABC$

$$\frac{a}{\sin A} = \frac{b}{\sin B} = \frac{c}{\sin C}$$

$$a^2 = b^2 + c^2 - 2bc \cos A$$

$$\Delta = \frac{1}{2} bc \sin A$$

1

$$f(x) = 3 + e^x \quad \text{for } x \in \mathbb{R}$$

$$g(x) = 9x - 5 \quad \text{for } x \in \mathbb{R}$$

(a) Find the range of f and of g . [2]

(b) Find the exact solution of $f^{-1}(x) = g'(x)$. [3]

(c) Find the solution of $g^2(x) = 112$. [2]

2 (a) Given that $\log_2 x + 2\log_4 y = 8$, find the value of xy .

[3]

(b) Using the substitution $y = 2^x$, or otherwise, solve $2^{2x+1} - 2^{x+1} - 2^x + 1 = 0$.

[4]

3 At time t s, a particle travelling in a straight line has acceleration $(2t+1)^{-\frac{1}{2}} \text{ms}^{-2}$. When $t = 0$, the particle is 4 m from a fixed point O and is travelling with velocity 8ms^{-1} away from O .

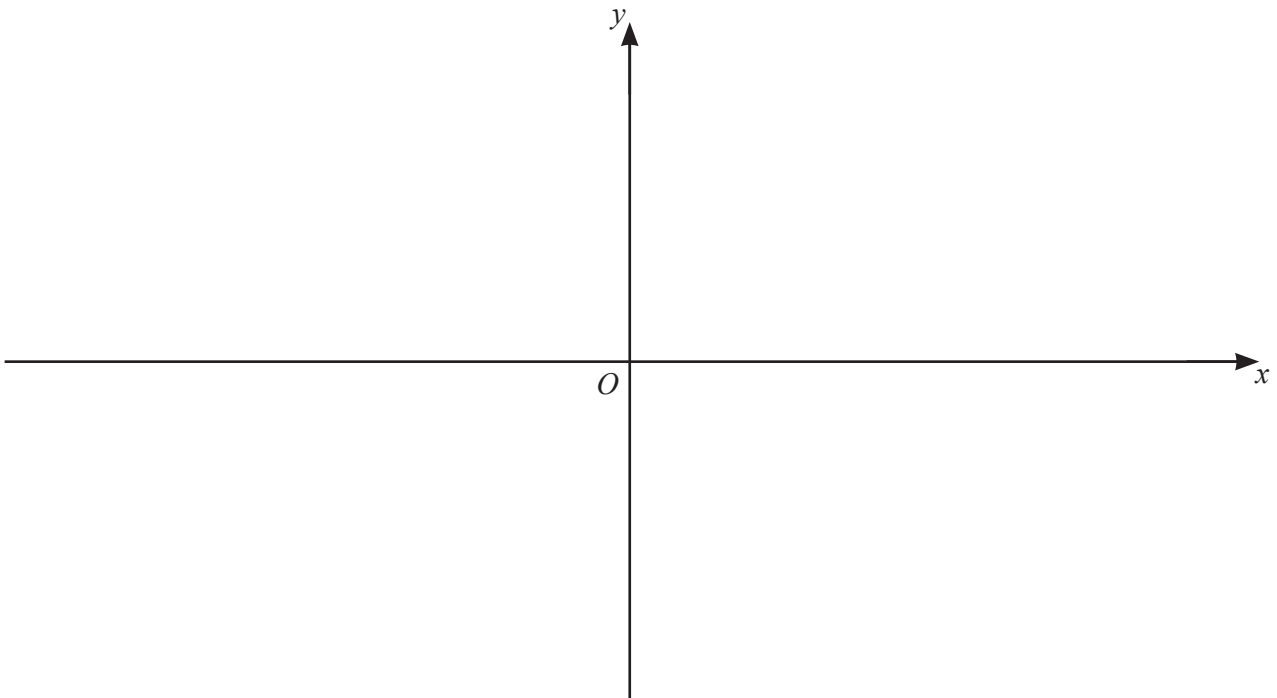
(a) Find the velocity of the particle at time t s. [3]

(b) Find the displacement of the particle from O at time t s. [4]

4 (a) Write $2x^2 + 3x - 4$ in the form $a(x+b)^2 + c$, where a , b and c are constants. [3]

(b) Hence write down the coordinates of the stationary point on the curve $y = 2x^2 + 3x - 4$. [2]

(c) On the axes below, sketch the graph of $y = |2x^2 + 3x - 4|$, showing the exact values of the intercepts of the curve with the coordinate axes. [3]



(d) Find the value of k for which $|2x^2 + 3x - 4| = k$ has exactly 3 values of x . [1]

5

$$p(x) = 6x^3 + ax^2 + 12x + b, \text{ where } a \text{ and } b \text{ are integers.}$$

$p(x)$ has a remainder of 11 when divided by $x - 3$ and a remainder of -21 when divided by $x + 1$.

(a) Given that $p(x) = (x - 2)Q(x)$, find $Q(x)$, a quadratic factor with numerical coefficients. [6]

(b) Hence solve $p(x) = 0$. [2]

6 (a) Find the unit vector in the direction of $\begin{pmatrix} 5 \\ -12 \end{pmatrix}$. [1]

(b) Given that $\begin{pmatrix} 4 \\ 1 \end{pmatrix} + k\begin{pmatrix} -2 \\ 3 \end{pmatrix} = r\begin{pmatrix} -10 \\ 5 \end{pmatrix}$, find the value of each of the constants k and r . [3]

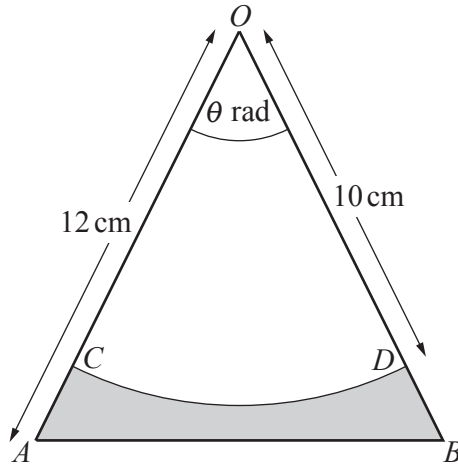
(c) Relative to an origin O , the points A , B and C have position vectors \mathbf{p} , $3\mathbf{q} - \mathbf{p}$ and $9\mathbf{q} - 5\mathbf{p}$ respectively.

(i) Find \overrightarrow{AB} in terms of \mathbf{p} and \mathbf{q} . [1]

(ii) Find \overrightarrow{AC} in terms of \mathbf{p} and \mathbf{q} . [1]

(iii) Explain why A , B and C all lie in a straight line. [1]

(iv) Find the ratio $AB : BC$. [1]



The diagram shows an isosceles triangle OAB such that $OA = OB = 12$ cm and angle $AOB = \theta$ radians. Points C and D lie on OA and OB respectively such that CD is an arc of the circle, centre O , radius 10 cm. The area of the sector $OCD = 35$ cm².

(a) Show that $\theta = 0.7$. [1]

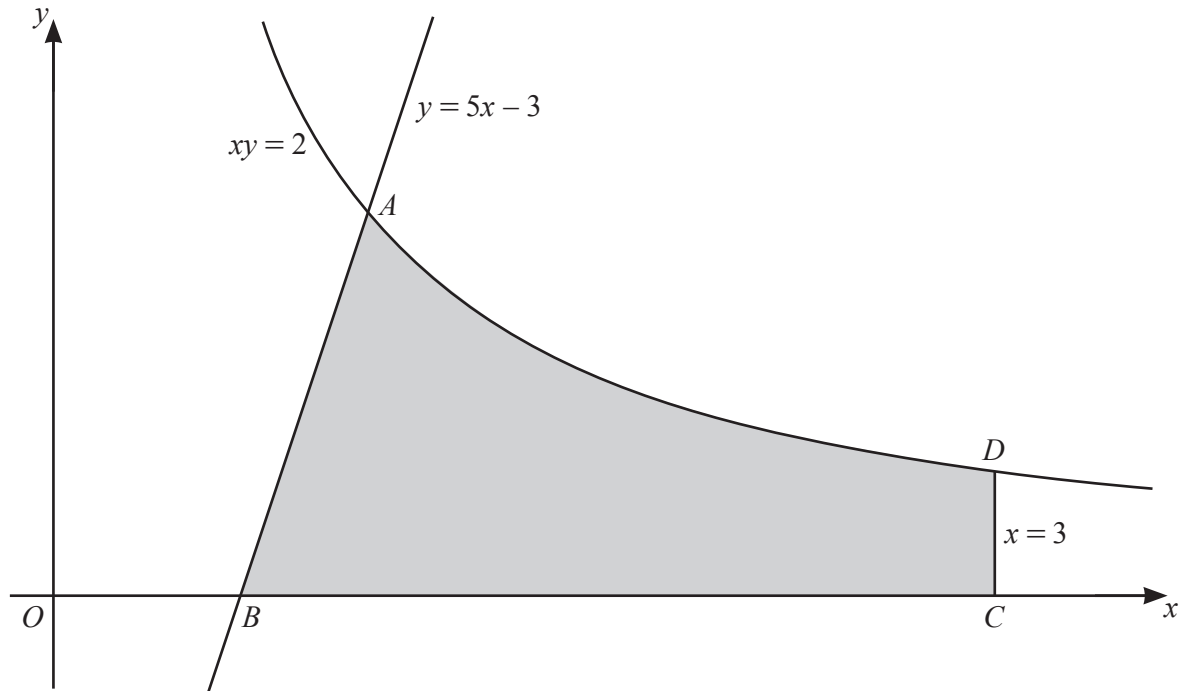
(b) Find the perimeter of the shaded region. [4]

(c) Find the area of the shaded region. [3]

- 8 (a) An arithmetic progression has a first term of 7 and a common difference of 0.4. Find the least number of terms so that the sum of the progression is greater than 300. [4]

- (b) The sum of the first two terms of a geometric progression is 9 and its sum to infinity is 36. Given that the terms of the progression are positive, find the common ratio. [4]

9



The diagram shows part of the curve $xy = 2$ intersecting the straight line $y = 5x - 3$ at the point A . The straight line meets the x -axis at the point B . The point C lies on the x -axis and the point D lies on the curve such that the line CD has equation $x = 3$. Find the exact area of the shaded region, giving your answer in the form $p + \ln q$, where p and q are constants. [8]

Additional working space for question 9.

10 (a) Given that $y = x\sqrt{x+2}$, show that $\frac{dy}{dx} = \frac{Ax+B}{2\sqrt{x+2}}$, where A and B are constants. [5]

(b) Find the exact coordinates of the stationary point of the curve $y = x\sqrt{x+2}$. [3]

(c) Determine the nature of this stationary point. [2]

BLANK PAGE

Permission to reproduce items where third-party owned material protected by copyright is included has been sought and cleared where possible. Every reasonable effort has been made by the publisher (UCLES) to trace copyright holders, but if any items requiring clearance have unwittingly been included, the publisher will be pleased to make amends at the earliest possible opportunity.

To avoid the issue of disclosure of answer-related information to candidates, all copyright acknowledgements are reproduced online in the Cambridge Assessment International Education Copyright Acknowledgements Booklet. This is produced for each series of examinations and is freely available to download at www.cambridgeinternational.org after the live examination series.

Cambridge Assessment International Education is part of the Cambridge Assessment Group. Cambridge Assessment is the brand name of the University of Cambridge Local Examinations Syndicate (UCLES), which itself is a department of the University of Cambridge.