

---

**GEOGRAPHY**

**9696/32**

Paper 3 Advanced Human Options

**May/June 2015**


INSERT

**1 hour 30 minutes**

---

**READ THESE INSTRUCTIONS FIRST**

This Insert contains the Photograph and all the Figures referred to in the questions.



---

This document consists of **5** printed pages and **3** blank pages.

Photograph A for Question 1

An agricultural system in the tropics



Fig. 1 for Question 4

Percentage of population with access to safe drinking water in 2011

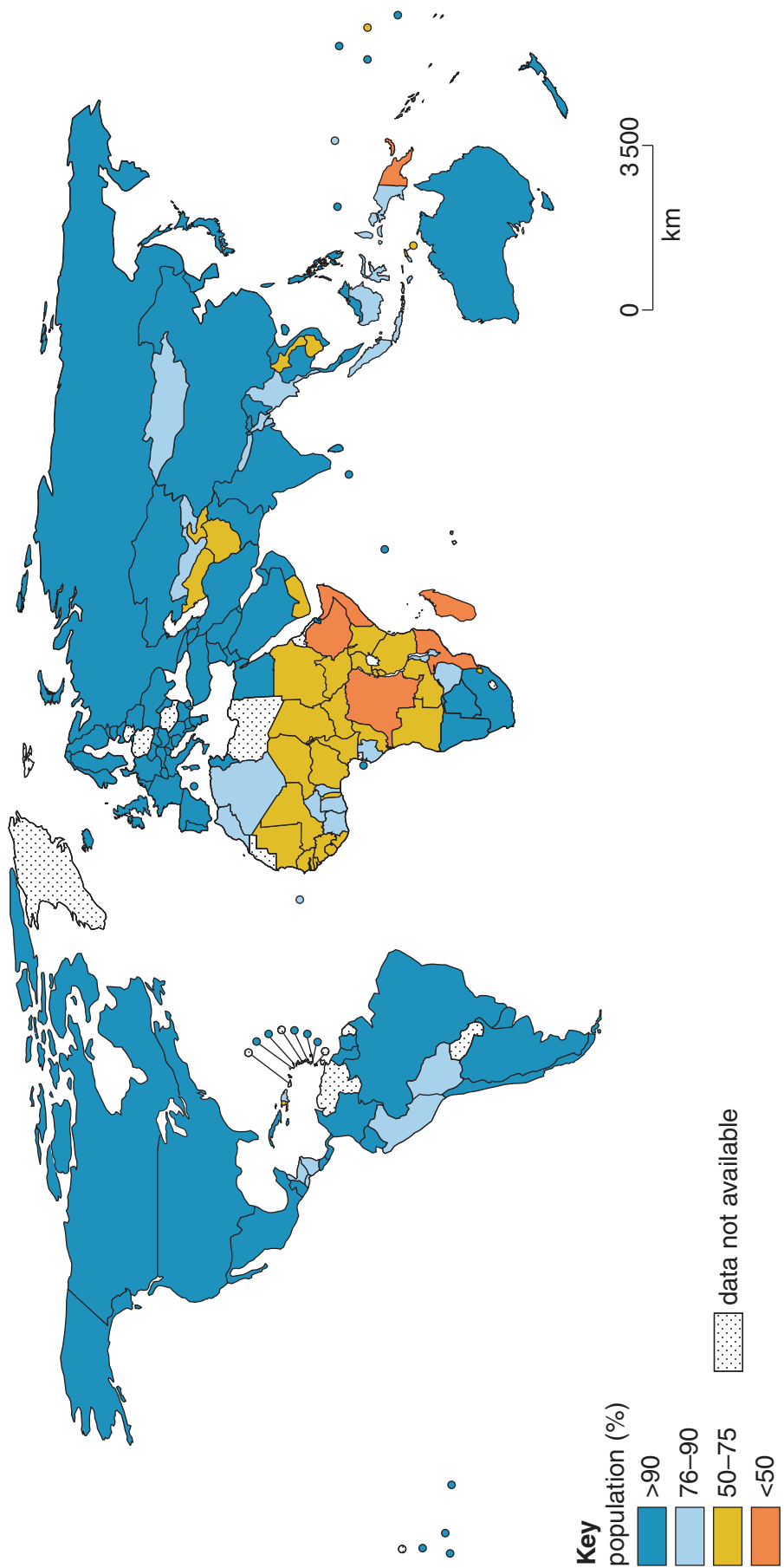


Fig. 2 for Question 6

A model of sustainable tourism

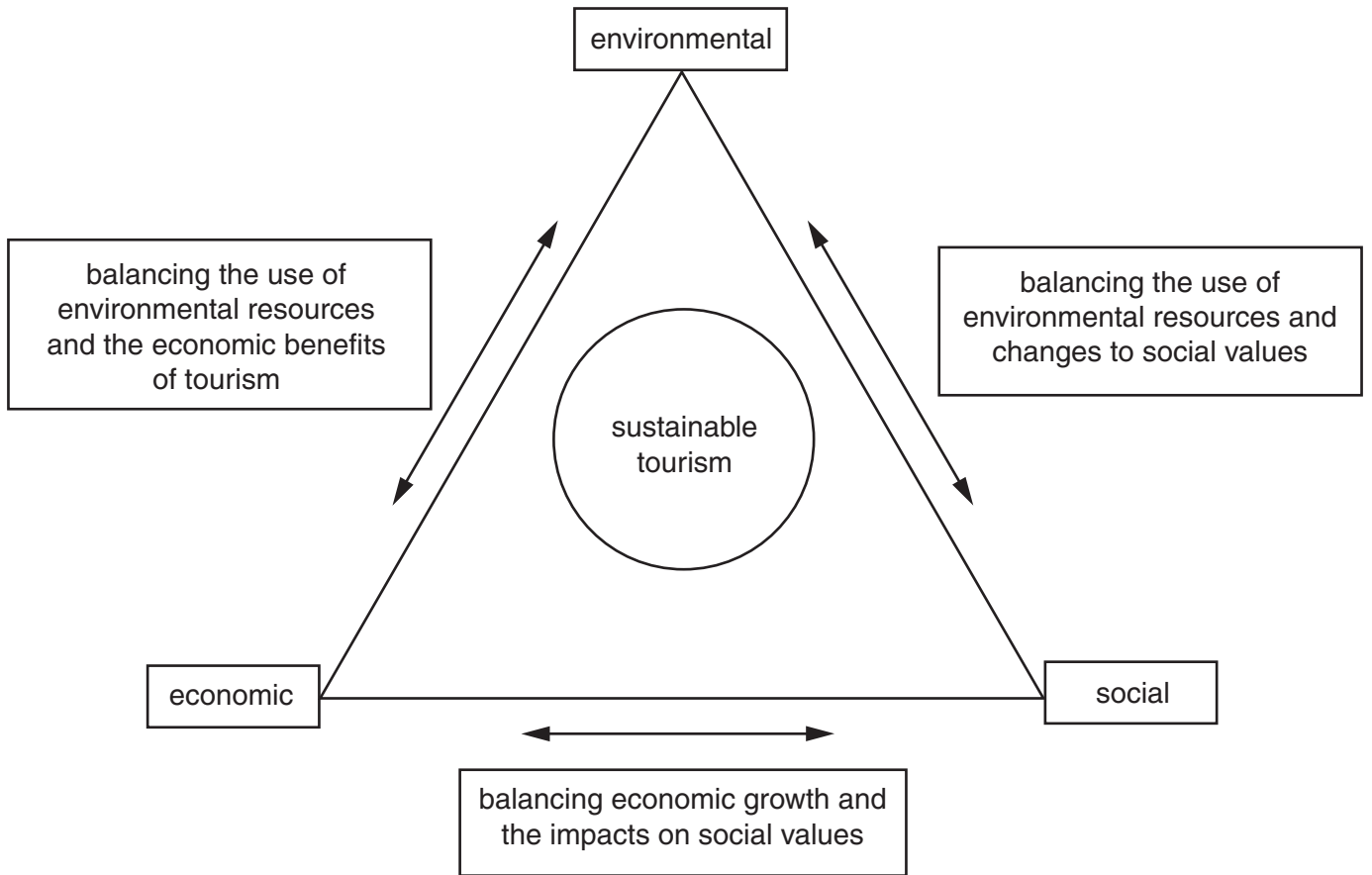
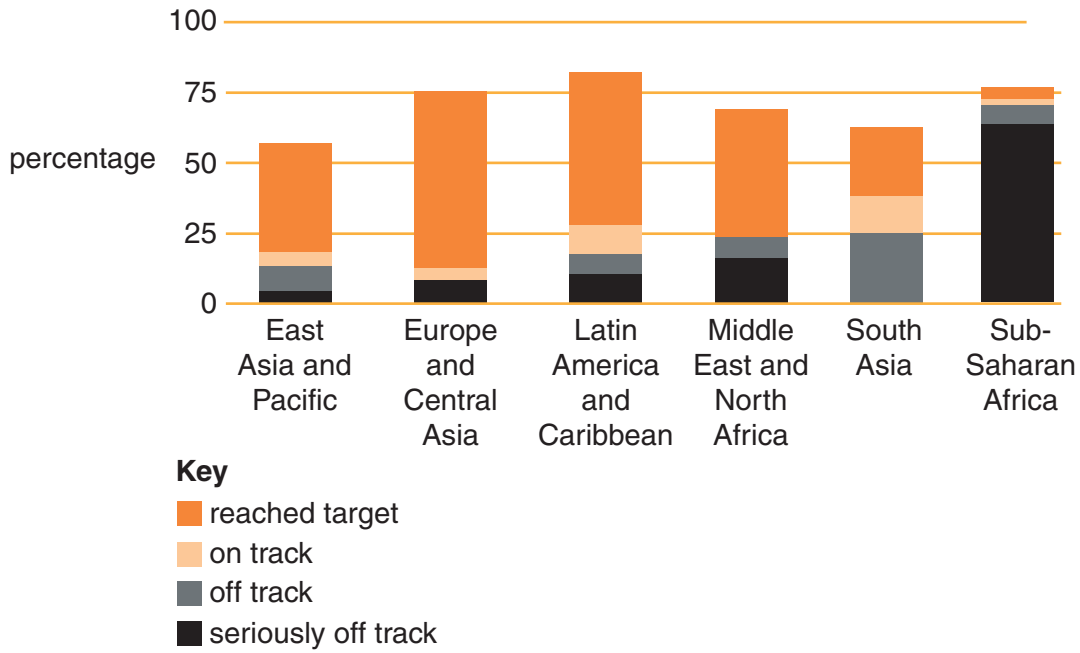


Fig. 3 for Question 8

### Progress towards providing universal primary education

Share of countries in region making progress towards providing universal primary education (percentage).

The term *universal primary education* means both boys and girls will be able to complete a full course of primary schooling.







**BLANK PAGE**

---

Permission to reproduce items where third-party owned material protected by copyright is included has been sought and cleared where possible. Every reasonable effort has been made by the publisher (UCLES) to trace copyright holders, but if any items requiring clearance have unwittingly been included, the publisher will be pleased to make amends at the earliest possible opportunity.

To avoid the issue of disclosure of answer-related information to candidates, all copyright acknowledgements are reproduced online in the Cambridge International Examinations Copyright Acknowledgements Booklet. This is produced for each series of examinations and is freely available to download at [www.cie.org.uk](http://www.cie.org.uk) after the live examination series.

Cambridge International Examinations is part of the Cambridge Assessment Group. Cambridge Assessment is the brand name of University of Cambridge Local Examinations Syndicate (UCLES), which is itself a department of the University of Cambridge.