



# Cambridge International AS & A Level

CANDIDATE  
NAME

--

CENTRE  
NUMBER

--	--	--	--	--

CANDIDATE  
NUMBER

--	--	--	--

\* 2 5 7 8 0 9 2 0 0 5 \*



**CHEMISTRY**

**9701/22**

Paper 2 AS Level Structured Questions

**October/November 2021**

**1 hour 15 minutes**

You must answer on the question paper.

You will need: Data booklet

## INSTRUCTIONS

- Answer **all** questions.
- Use a black or dark blue pen. You may use an HB pencil for any diagrams or graphs.
- Write your name, centre number and candidate number in the boxes at the top of the page.
- Write your answer to each question in the space provided.
- Do **not** use an erasable pen or correction fluid.
- Do **not** write on any bar codes.
- You may use a calculator.
- You should show all your working, use appropriate units and use an appropriate number of significant figures.

## INFORMATION

- The total mark for this paper is 60.
- The number of marks for each question or part question is shown in brackets [ ].

This document has **12** pages.

Answer **all** the questions in the spaces provided.

1 Hydrogen iodide, HI, is a colourless gas at room temperature.

(a) (i) Explain why HI has a higher boiling point than HCl and HBr.

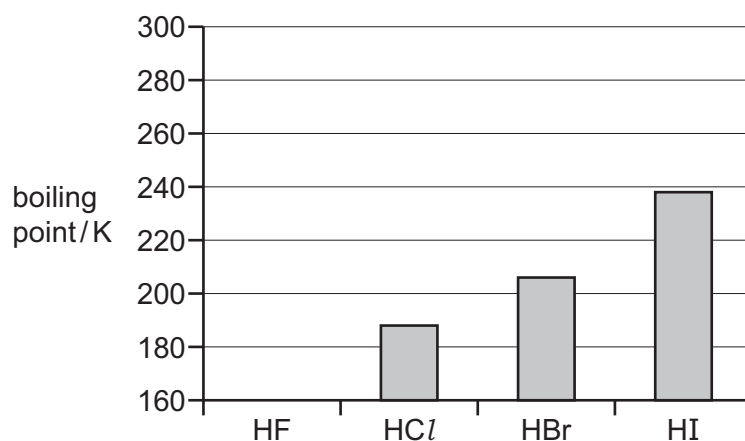
.....

.....

.....

..... [2]

(ii) The bar chart shows the boiling points of HCl, HBr and HI. The boiling point of HF is not shown.



Hydrogen bonds form between HF molecules.

Draw a bar on the bar chart to predict the boiling point of HF.

Explain your answer.

.....

..... [2]

(b) The standard enthalpy change of formation,  $\Delta H_f^\ominus$ , of HI(g) is  $+26.5 \text{ kJ mol}^{-1}$ .


Define the term *standard enthalpy change of formation*.

.....

.....

..... [2]

- (c) HI(g) can be formed by reacting H<sub>2</sub>(g) with I<sub>2</sub>(g). The reaction is reversible, and an equilibrium forms quickly at high temperatures.



- (i) Construct an expression for the equilibrium constant,  $K_p$ , for the reaction of H<sub>2</sub>(g) and I<sub>2</sub>(g) to form HI(g).

$K_p =$

[1]

- (ii) The equilibrium partial pressures of the gases at 200 °C are as follows.

$$p_{\text{H}_2(\text{g})} = 895 \text{ Pa}$$

$$p_{\text{I}_2(\text{g})} = 895 \text{ Pa}$$

$$p_{\text{HI}(\text{g})} = 4800 \text{ Pa}$$

Calculate  $K_p$  for this reaction.

$K_p = \dots\dots\dots$  [1]

- (iii) State how the value of  $K_p$  would change, if at all, if the reaction were carried out at 100 °C rather than 200 °C.

Explain your answer.

.....  
 .....  
 .....  
 .....

[2]

(d) HI reacts with oxygen to form iodine and water.

(i) Construct an equation for the reaction of HI with oxygen.

..... [1]

(ii) Explain, with reference to oxidation numbers, why this reaction is a redox reaction.

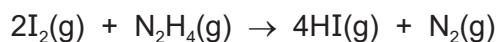
.....

.....

.....

..... [2]

(e) HI(g) can also be formed by the reaction of I<sub>2</sub>(g) with hydrazine, N<sub>2</sub>H<sub>4</sub>(g).



State the change in pressure that would occur when 2 mol I<sub>2</sub>(g) fully reacts with 1 mol N<sub>2</sub>H<sub>4</sub>(g) in a sealed container at constant temperature. Explain your answer.

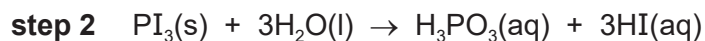
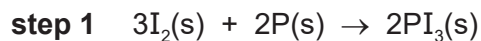
.....

.....

.....

..... [2]

(f) In the laboratory, HI(aq) can be formed in a two-step process.



(i) Draw a 'dot-and-cross' diagram of a  $\text{PI}_3$  molecule.

[2]

(ii) Name the type of reaction in **step 2**.

..... [1]

(iii)  $\text{H}_3\text{PO}_3(\text{aq})$  and  $\text{HI}(\text{aq})$  are both strong Brønsted–Lowry acids.

Give the meaning of the term *strong Brønsted–Lowry acid*.

.....  
 .....  
 ..... [2]

(iv) Give the formula of the conjugate base of  $\text{H}_3\text{PO}_3$ .

..... [1]

(g) HI(g) reacts with propene,  $\text{CH}_3\text{CH}=\text{CH}_2(\text{g})$  to form a mixture of 1-iodopropane and 2-iodopropane.

(i) Identify which of 1-iodopropane and 2-iodopropane is the major product of this reaction.

Explain your answer.

.....

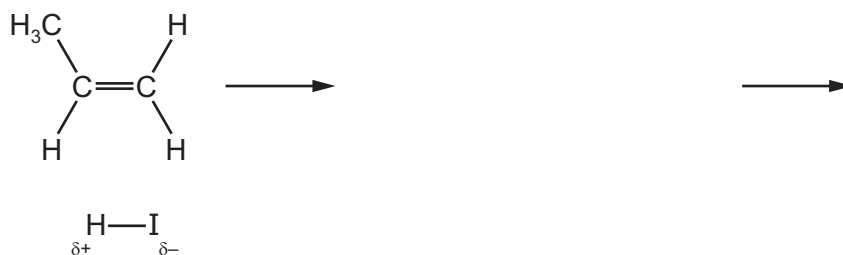
.....

.....

..... [2]

(ii) Complete the diagram to show the mechanism of the reaction between HI and  $\text{CH}_3\text{CH}=\text{CH}_2$  that forms the major product identified in (g)(i).

Include curly arrows, lone pairs of electrons and charges as necessary.



[3]

[Total: 26]

2 (a) Table 1 gives physical data for some of the Period 3 elements.

**Table 1**

atomic number, Z	11	12	13	14	15	16	17
bonding present in element	M						C
first ionisation energy/kJ mol <sup>-1</sup>	494	736	577	786	1060	1000	1260
maximum oxidation number							+7
anionic radius/nm	–	–	–	0.271	0.212	0.184	0.181

(i) Complete the row in the table labelled 'bonding present in element'.

Use C = covalent, I = ionic, M = metallic, as appropriate.

[1]

(ii) Explain the difference between the first ionisation energies of the elements with atomic numbers 11 and 17.

.....

.....

.....

.....

..... [2]

(iii) Explain the difference between the first ionisation energies of the elements with atomic numbers 15 and 16.

.....

.....

.....

..... [2]

(iv) Complete the row in the table labelled 'maximum oxidation number'.

[1]

(v) Explain the variation in anionic radius for the elements with atomic numbers 14 to 17.

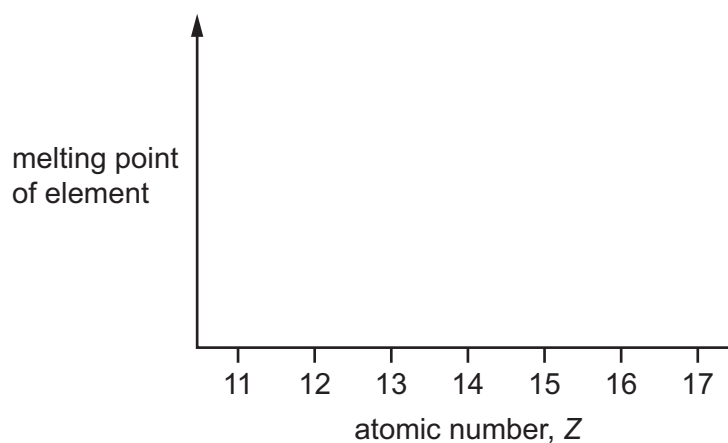
.....

.....

.....

..... [2]

- (b) Use the axes to sketch a graph that shows the trend in melting points of the elements with atomic numbers 11 to 17.



[2]

- (c) Dmitri Mendeleev published the first Periodic Table in 1869.

Mendeleev used his knowledge of chemical periodicity to propose the properties of gallium,  ${}_{31}\text{Ga}$ , a Group 13 element.

Table 2 gives some chemical and physical data of elements in Group 13.

**Table 2**

element	density / $\text{g cm}^{-3}$	boiling point /K	cationic radius /nm
${}_{5}\text{B}$	2.34	3930	0.020
${}_{13}\text{Al}$		2470	0.050
${}_{31}\text{Ga}$	5.91	2400	
${}_{49}\text{In}$	7.30		0.081
${}_{81}\text{Tl}$	11.8	1460	0.095

Complete the table by predicting values for the missing data.

[3]



(d) Indium and aluminium are elements in Group 13 of the Periodic Table.

Indium has very similar chemical properties to aluminium.

- Indium reacts vigorously with hydrochloric acid to form a colourless gas and a salt in solution.
- Indium oxide,  $\text{In}_2\text{O}_3$ , is amphoteric.
- Gaseous indium bromide has the formula  $\text{In}_2\text{Br}_6$ . This molecule contains coordinate bonds.

(i) Identify the formula of the salt formed when indium reacts with hydrochloric acid.

..... [1]

(ii) Construct an equation for the reaction of  $\text{In}_2\text{O}_3$  with excess aqueous NaOH.

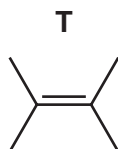
..... [1]

(iii) Draw a diagram that clearly shows the types of bond present in  $\text{In}_2\text{Br}_6(\text{g})$ .

[2]

[Total: 17]

3 Compound **T** is an isomer of  $C_6H_{12}$ .



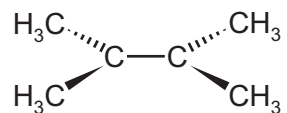
(a) Name **T**.

..... [1]

(b) Draw the skeletal formula of a structural isomer of **T** that shows *cis-trans* (geometrical) isomerism.

[1]

(c) Each carbon atom in **T** forms a sigma ( $\sigma$ ) bond to at least one other carbon atom, as shown.

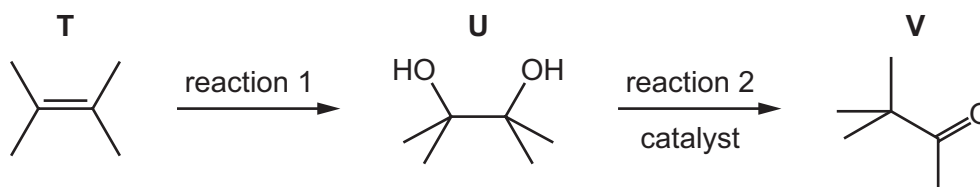


(i) On the diagram, draw the orbitals that represent the pi ( $\pi$ ) bond that is also present in **T**. [1]

(ii) State the hybridisation of the two carbon atoms between which the pi ( $\pi$ ) bond forms.

..... [1]

(d) A reaction scheme starting with **T** is shown. Reaction 2 occurs in the presence of a catalyst; knowledge of the mechanism for this reaction is not required.



(i) Give the reagent(s) and conditions for reaction 1.

..... [1]

- (ii) State and explain how 2,4-dinitrophenylhydrazine (2,4-DNPH) can be used to detect the presence of **V** as a product of reaction 2.

.....  
 .....  
 ..... [2]

- (iii) The progress of reaction 2 can be monitored by infrared spectroscopy.

The absorption caused by O–H bonds is always present because water is used as a solvent.

Identify two absorptions, and the bonds responsible for these absorptions, whose appearance will change significantly during the reaction.

1 .....

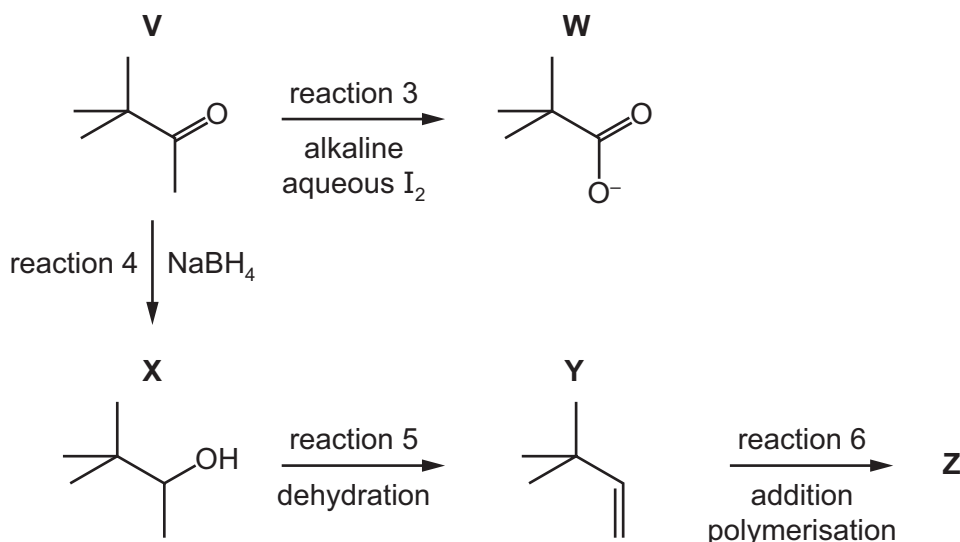
.....

2 .....

..... [2]

- (e) **V** is used in a wide range of organic reactions.

Some reactions of **V** are shown.



- (i) **V** and **W** are colourless and soluble in water.

State what you would observe in reaction 3.

..... [1]

- (ii) Reaction 3 is a redox reaction.

Identify which of the **reactants** is reduced in this reaction.

..... [1]

- (iii) Construct an equation for reaction 4.

Use [H] in the equation to represent an atom of hydrogen from NaBH<sub>4</sub>.

C<sub>6</sub>H<sub>12</sub>O + ..... [1]

- (iv) **X** is a mixture of two optical isomers.

Draw the two optical isomers in the boxes provided.



[2]

- (v) Both optical isomers of **X** can be dehydrated to form a single product, **Y**.  
Give the reagent(s) and conditions required for reaction 5.

..... [1]

- (vi) **Y** can form an addition polymer **Z**.

Draw one repeat unit of **Z**.

[1]

- (vii) Reaction 6 does not proceed quickly at room temperature.

Suggest why this is the case.

.....

..... [1]

[Total: 17]

Permission to reproduce items where third-party owned material protected by copyright is included has been sought and cleared where possible. Every reasonable effort has been made by the publisher (UCLES) to trace copyright holders, but if any items requiring clearance have unwittingly been included, the publisher will be pleased to make amends at the earliest possible opportunity.

To avoid the issue of disclosure of answer-related information to candidates, all copyright acknowledgements are reproduced online in the Cambridge Assessment International Education Copyright Acknowledgements Booklet. This is produced for each series of examinations and is freely available to download at [www.cambridgeinternational.org](http://www.cambridgeinternational.org) after the live examination series.

Cambridge Assessment International Education is part of the Cambridge Assessment Group. Cambridge Assessment is the brand name of the University of Cambridge Local Examinations Syndicate (UCLES), which itself is a department of the University of Cambridge.